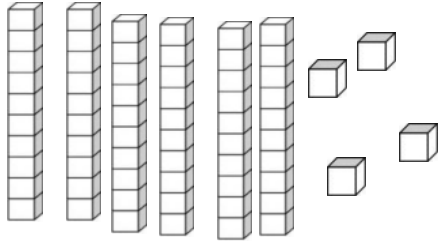


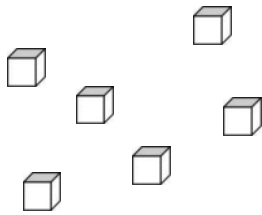
## Counting tens and ones

### Grade 1 Base Ten Blocks Worksheet

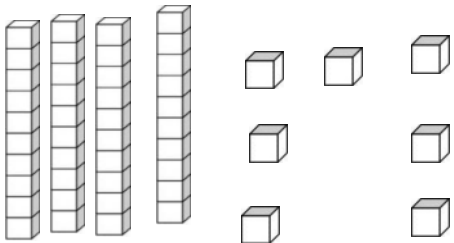
Find the total number of blocks.



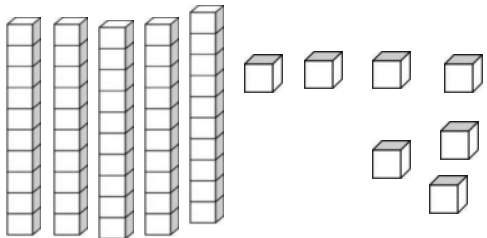
$$= \underline{\quad} \text{ tens} + \underline{\quad} \text{ ones} = \underline{\quad}$$



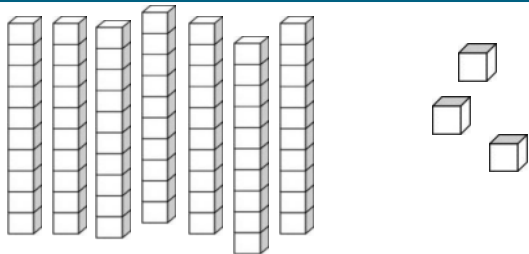
$$= \underline{\quad} \text{ tens} + \underline{\quad} \text{ ones} = \underline{\quad}$$



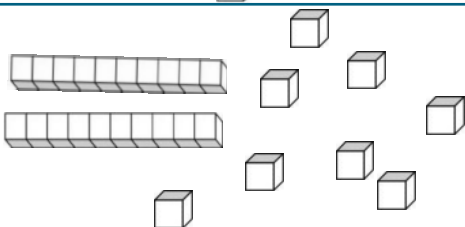
$$= \underline{\quad} \text{ tens} + \underline{\quad} \text{ ones} = \underline{\quad}$$



$$= \underline{\quad} \text{ tens} + \underline{\quad} \text{ ones} = \underline{\quad}$$



$$= \underline{\quad} \text{ tens} + \underline{\quad} \text{ ones} = \underline{\quad}$$



$$= \underline{\quad} \text{ tens} + \underline{\quad} \text{ ones} = \underline{\quad}$$