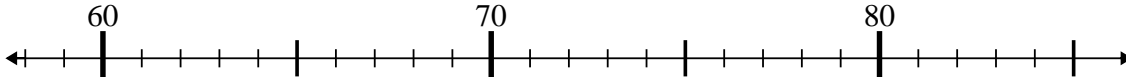




Use the numberlines to solve each problem.

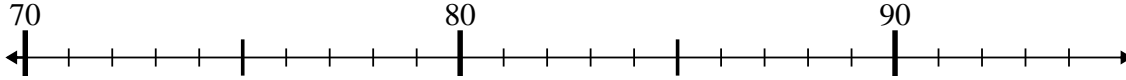
Answers

1) $63 - 1 = ?$



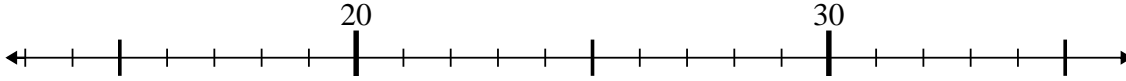
1. _____

2) $76 - 0 = ?$



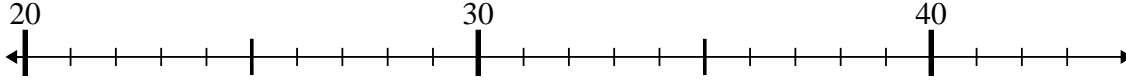
2. _____

3) $29 - 15 = ?$



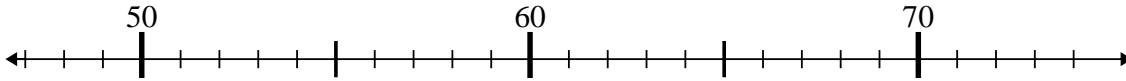
3. _____

4) $36 + 1 = ?$



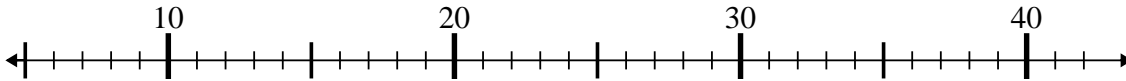
4. _____

5) $73 - 0 = ?$



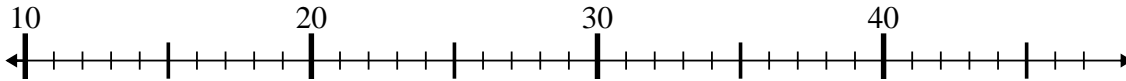
5. _____

6) $19 + 4 = ?$



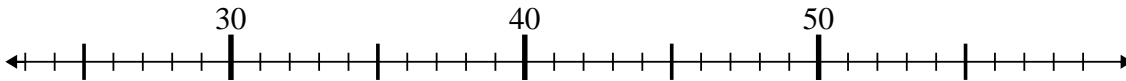
6. _____

7) $42 - 3 = ?$



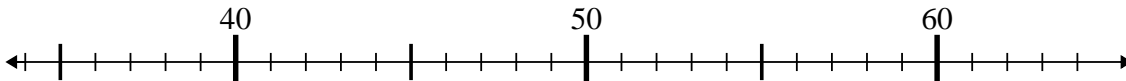
7. _____

8) $52 + 4 = ?$



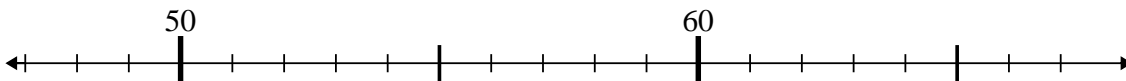
8. _____

9) $51 - 4 = ?$



9. _____

10) $49 + 14 = ?$

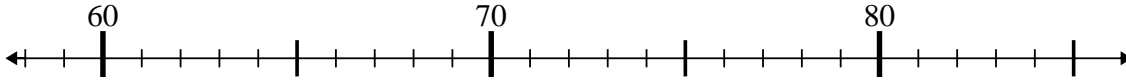


10. _____

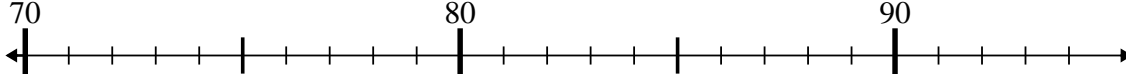


Use the numberlines to solve each problem.

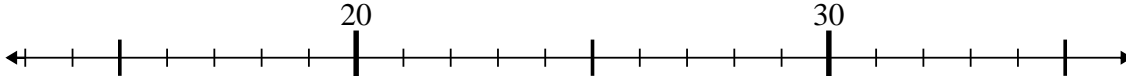
1) $63 - 1 = ?$



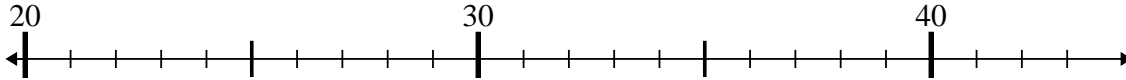
2) $76 - 0 = ?$



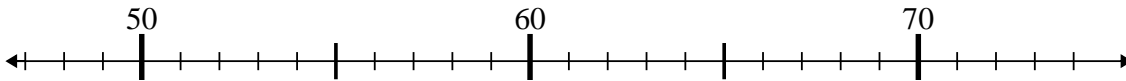
3) $29 - 15 = ?$



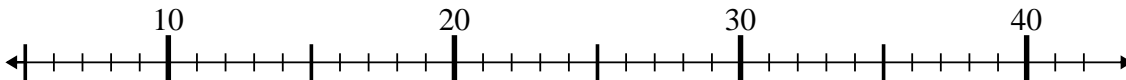
4) $36 + 1 = ?$



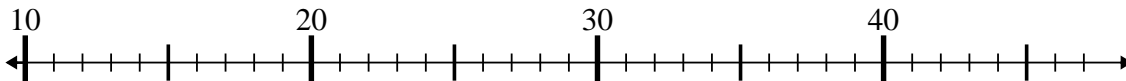
5) $73 - 0 = ?$



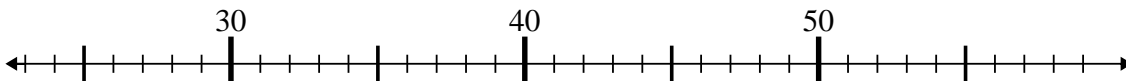
6) $19 + 4 = ?$



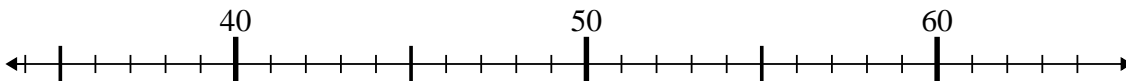
7) $42 - 3 = ?$



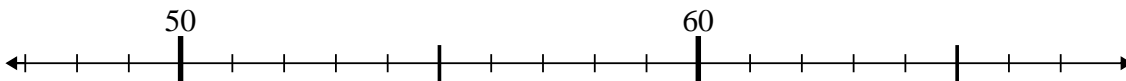
8) $52 + 4 = ?$



9) $51 - 4 = ?$



10) $49 + 14 = ?$



Answers

1. 62
2. 76
3. 14
4. 37
5. 73
6. 23
7. 39
8. 56
9. 47
10. 63