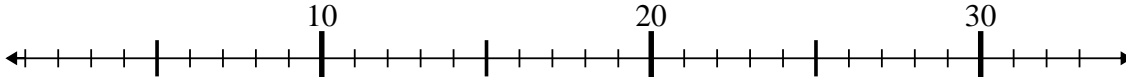




Use the numberlines to solve each problem.

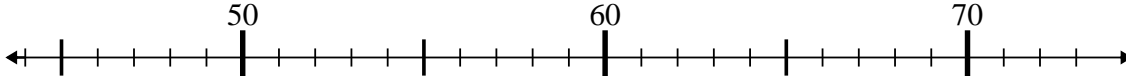
Answers

1) $2 + 30 = ?$



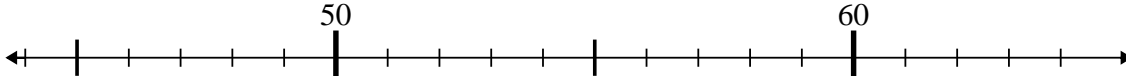
1. _____

2) $69 - 13 = ?$



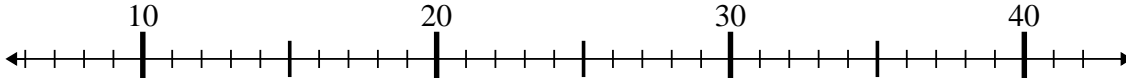
2. _____

3) $44 + 5 = ?$



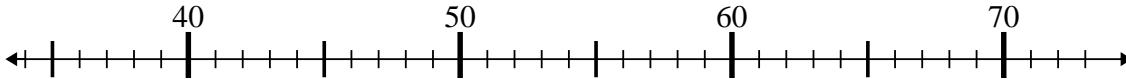
3. _____

4) $13 + 3 = ?$



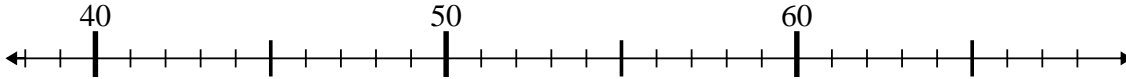
4. _____

5) $49 - 2 = ?$



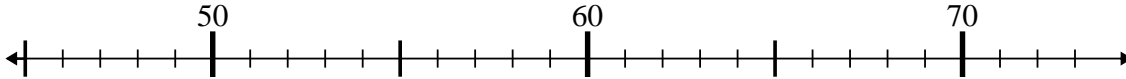
5. _____

6) $42 + 8 = ?$



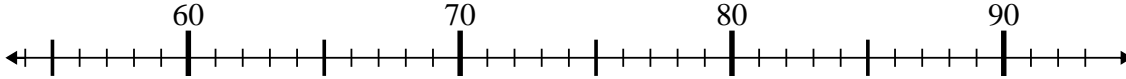
6. _____

7) $69 - 21 = ?$



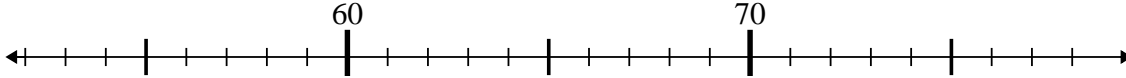
7. _____

8) $70 + 22 = ?$



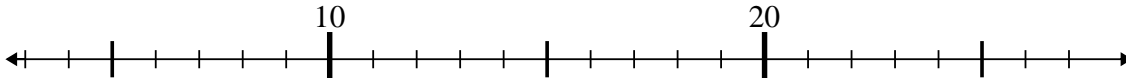
8. _____

9) $78 - 11 = ?$



9. _____

10) $14 + 4 = ?$

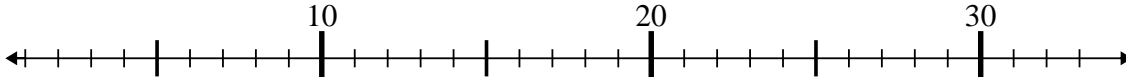


10. _____

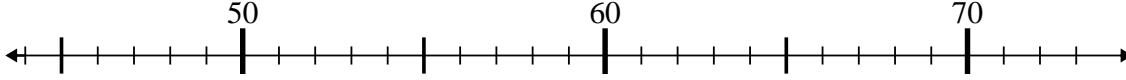


Use the numberlines to solve each problem.

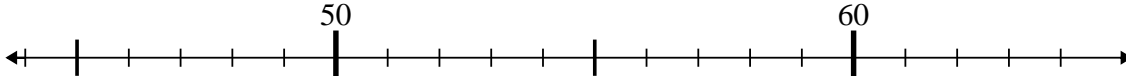
1) $2 + 30 = ?$



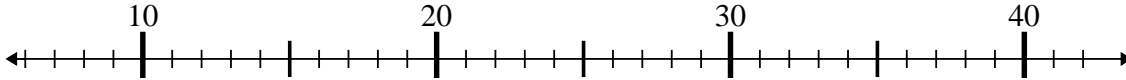
2) $69 - 13 = ?$



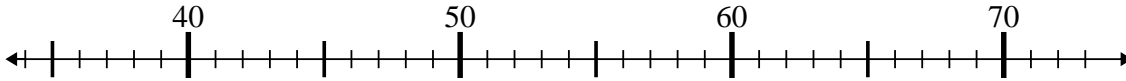
3) $44 + 5 = ?$



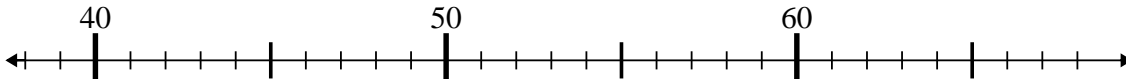
4) $13 + 3 = ?$



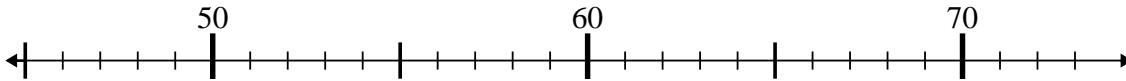
5) $49 - 2 = ?$



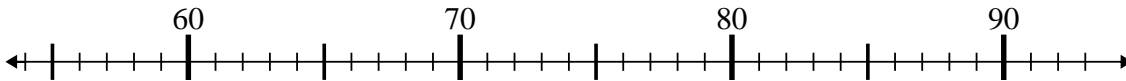
6) $42 + 8 = ?$



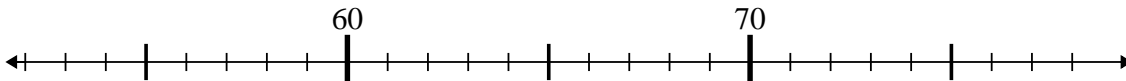
7) $69 - 21 = ?$



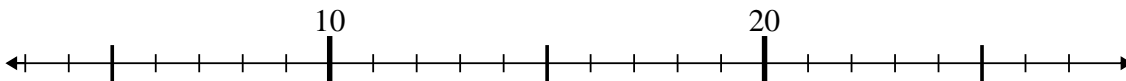
8) $70 + 22 = ?$



9) $78 - 11 = ?$



10) $14 + 4 = ?$



Answers

1. 32
2. 56
3. 49
4. 16
5. 47
6. 50
7. 48
8. 92
9. 67
10. 18