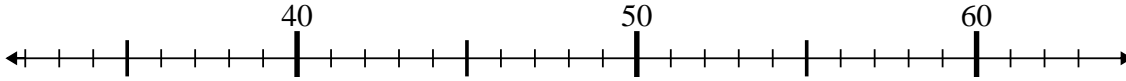




Use the numberlines to solve each problem.

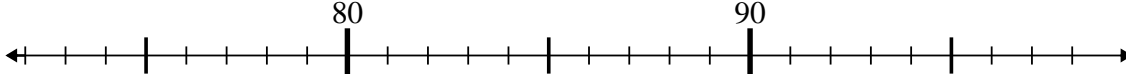
Answers

1) $36 + 3 = ?$



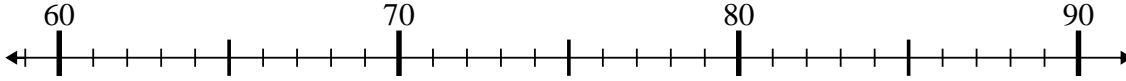
1. _____

2) $91 + 6 = ?$



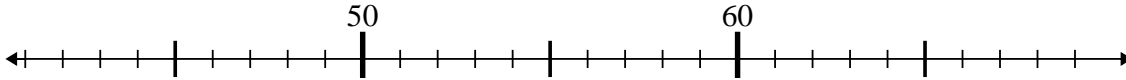
2. _____

3) $77 + 8 = ?$



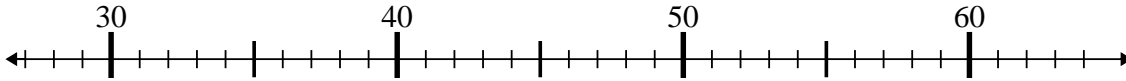
3. _____

4) $47 + 5 = ?$



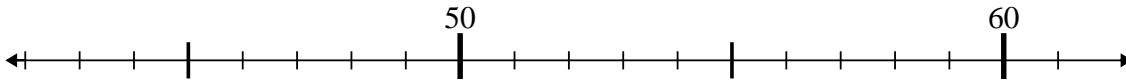
4. _____

5) $31 + 7 = ?$



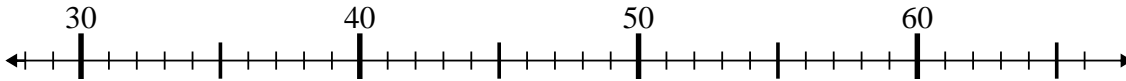
5. _____

6) $53 - 9 = ?$



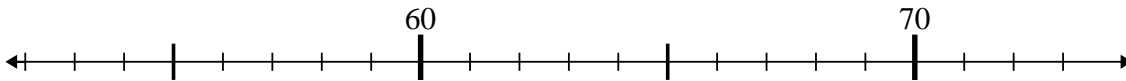
6. _____

7) $33 + 9 = ?$



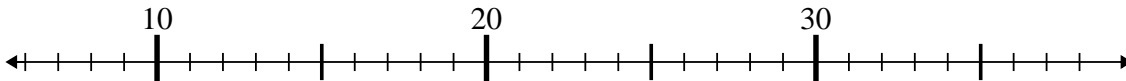
7. _____

8) $56 + 6 = ?$



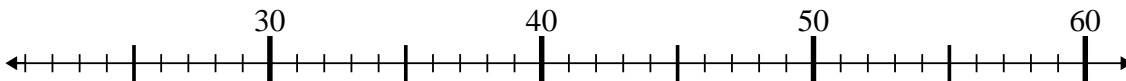
8. _____

9) $8 + 27 = ?$



9. _____

10) $28 - 2 = ?$

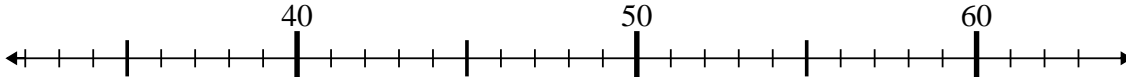


10. _____

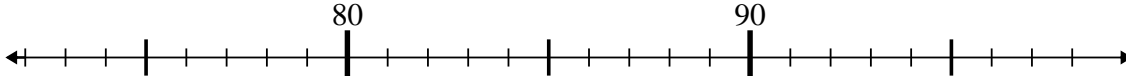


Use the numberlines to solve each problem.

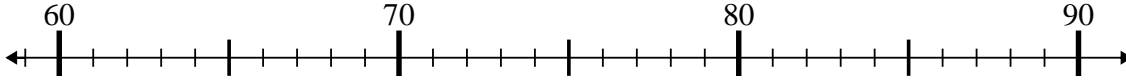
1) $36 + 3 = ?$



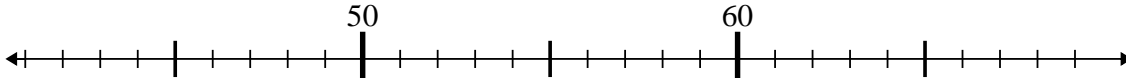
2) $91 + 6 = ?$



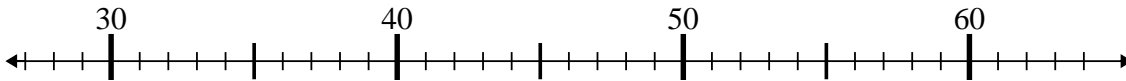
3) $77 + 8 = ?$



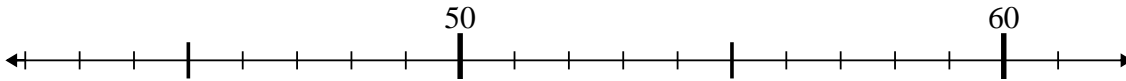
4) $47 + 5 = ?$



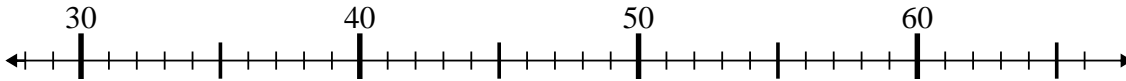
5) $31 + 7 = ?$



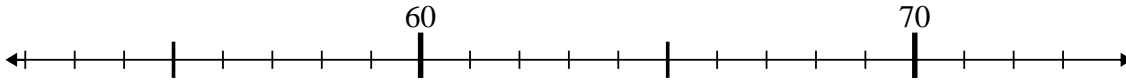
6) $53 - 9 = ?$



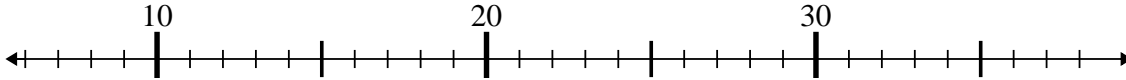
7) $33 + 9 = ?$



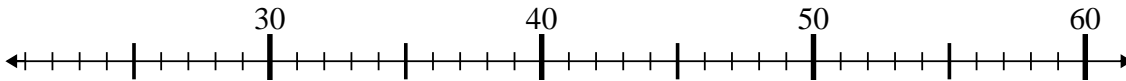
8) $56 + 6 = ?$



9) $8 + 27 = ?$



10) $28 - 2 = ?$



Answers

1. 39
2. 97
3. 85
4. 52
5. 38
6. 44
7. 42
8. 62
9. 35
10. 26