



Area / Perimeter Worksheet


- 1 a. Find the area and perimeter of this rectangle.



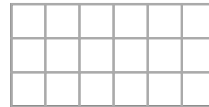
- 1 b. Find the area and perimeter of this rectangle.



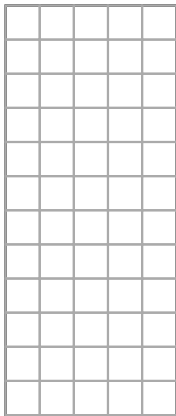
- 2 a. Find the area and perimeter of this rectangle.




- 2 b. Find the area and perimeter of this rectangle.



- 3 a. Find the area and perimeter of this rectangle.



- 3 b. Find the area and perimeter of this rectangle.



Name: _____ Date: _____

Answer Key

1 a. The area is 42 square units and the perimeter is 26 units.	1 b. The area is 12 square units and the perimeter is 14 units.
2 a. The area is 32 square units and the perimeter is 24 units.	2 b. The area is 18 square units and the perimeter is 18 units.
3 a. The area is 60 square units and the perimeter is 34 units.	3 b. The area is 8 square units and the perimeter is 12 units.