



Area / Perimeter Worksheet

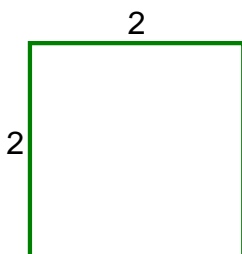
- 1 a. Find the missing side length, when the perimeter is 28.



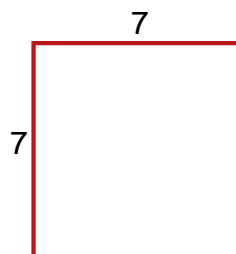
- 1 b. Find the perimeter of the rectangle.



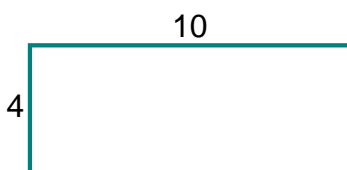
- 2 a. Find the area of the square.



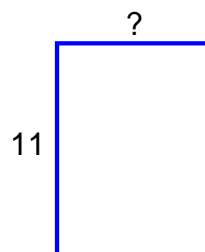
- 2 b. Find the area of the square.



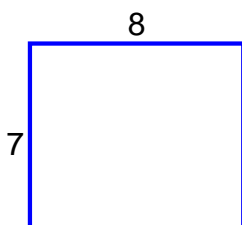
- 3 a. Find the perimeter of the rectangle.



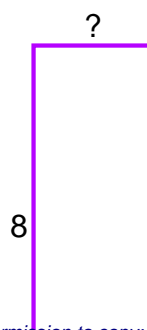
- 3 b. Find the missing side length, when the perimeter is 38.



- 4 a. Find the perimeter of the rectangle.



- 4 b. Find the missing side length, when the perimeter is 22.



Name: _____ Date: _____



Name: _____ Date: _____

Answer Key

1 a. 3	1 b. 32
2 a. 4 square units	2 b. 49 square units
3 a. 28	3 b. 8
4 a. 30	4 b. 3