

Name

Date



COUNTING TENS AND ONES SHEET 1

Count the number of squares in each box.
Remember to count the TENS first, then the ONES.

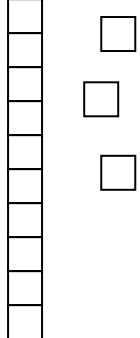
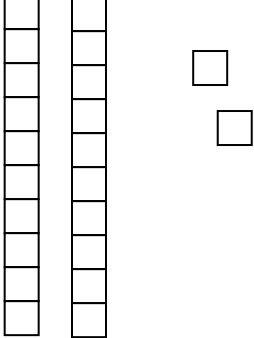
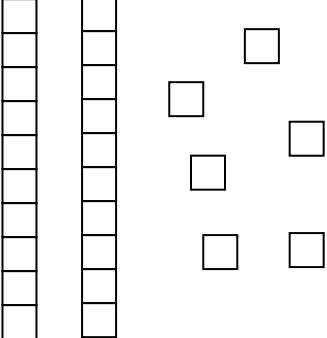
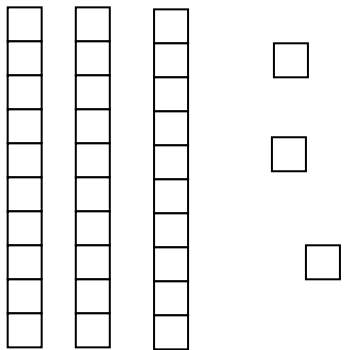
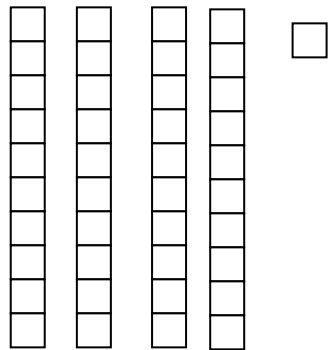
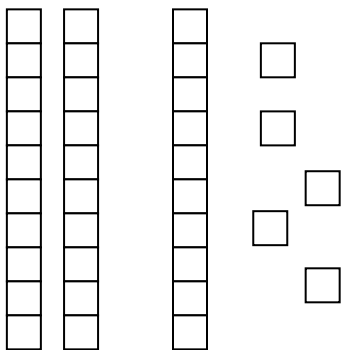
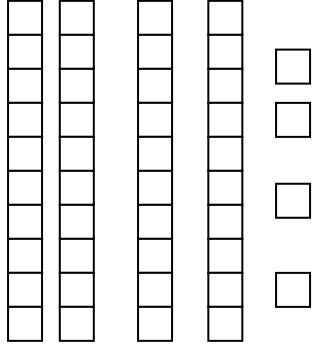

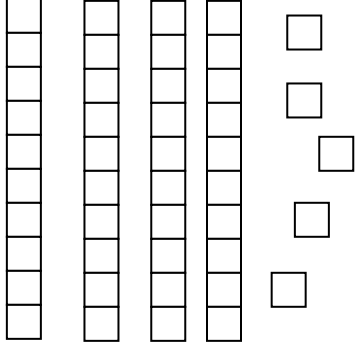
1)	2)	3)
How many?	How many?	How many?
4)	5)	6)
How many?	How many?	How many?
7)	8)	9)
How many?	How many?	How many?

Name

Date



COUNTING TENS AND ONES SHEET 1 ANSWERS

1) 	2) 	3) 
How many? <u>13</u>	How many? <u>22</u>	How many? <u>26</u>
4) 	5) 	6) 
How many? <u>33</u>	How many? <u>41</u>	How many? <u>35</u>
7) 	8) 	9) 
How many? <u>44</u>	How many? <u>50</u>	How many? <u>45</u>