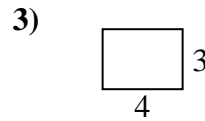
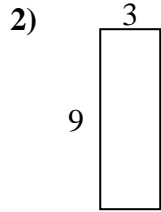
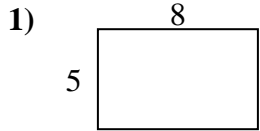


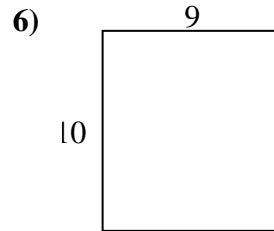
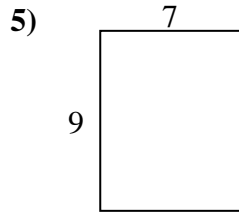
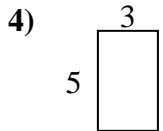


Find the perimeter and area of each figure. Each figure is in centimeters (cm). Not to scale.

Answers



1. _____



2. _____

3. _____

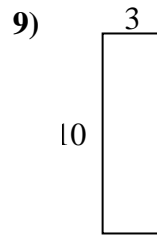
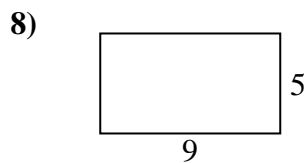
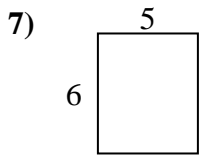
4. _____

5. _____

6. _____

7. _____

8. _____

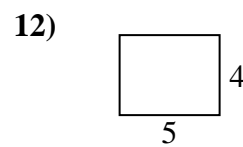
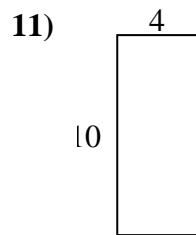
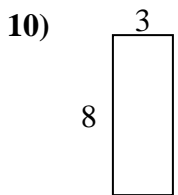


9. _____

10. _____

11. _____

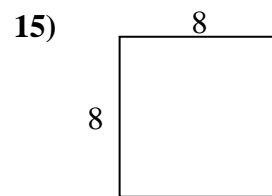
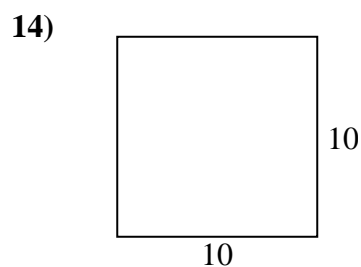
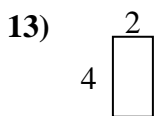
12. _____



13. _____

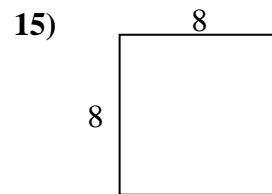
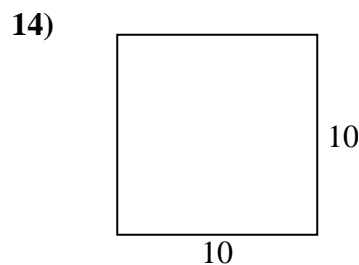
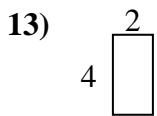
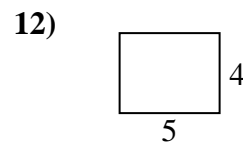
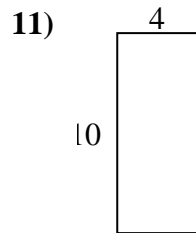
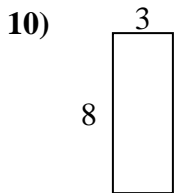
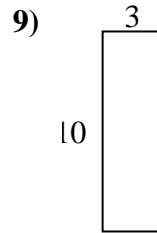
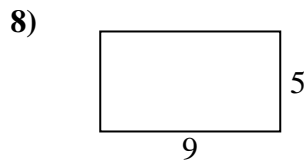
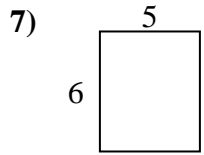
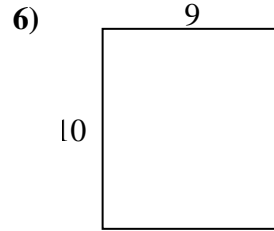
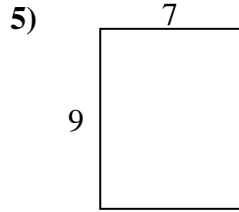
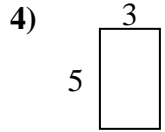
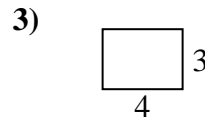
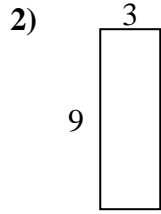
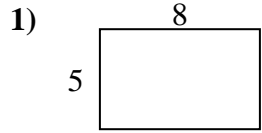
14. _____

15. _____





Find the perimeter and area of each figure. Each figure is in centimeters (cm). Not to scale.



Answers

1. 26 cm 40 cm²
2. 24 cm 27 cm²
3. 14 cm 12 cm²
4. 16 cm 15 cm²
5. 32 cm 63 cm²
6. 38 cm 90 cm²
7. 22 cm 30 cm²
8. 28 cm 45 cm²
9. 26 cm 30 cm²
10. 22 cm 24 cm²
11. 28 cm 40 cm²
12. 18 cm 20 cm²
13. 12 cm 8 cm²
14. 40 cm 100 cm²
15. 32 cm 64 cm²