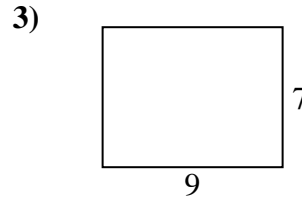
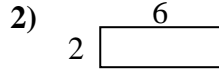
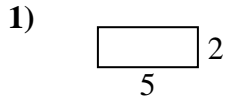




Find the perimeter and area of each figure. Each figure is in centimeters (cm). Not to scale.

Answers

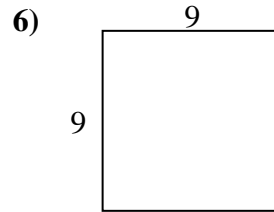
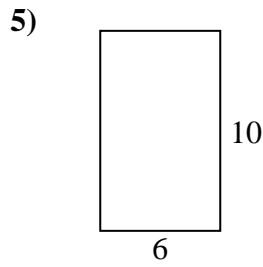
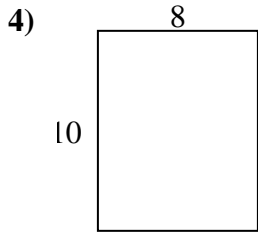


1. _____

2. _____

3. _____

4. _____

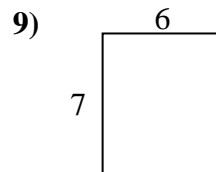
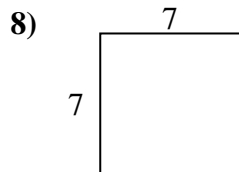
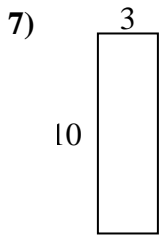


5. _____

6. _____

7. _____

8. _____

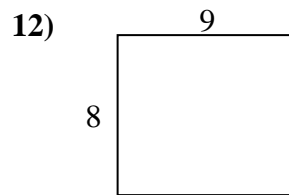
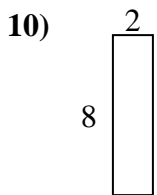


9. _____

10. _____

11. _____

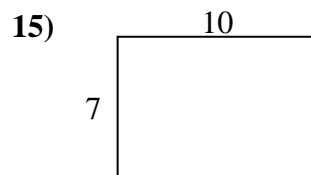
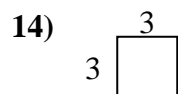
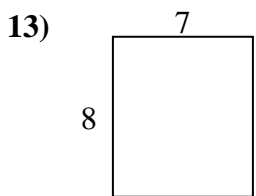
12. _____



13. _____

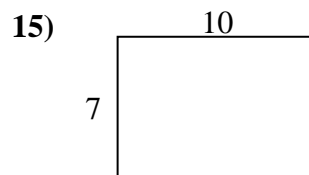
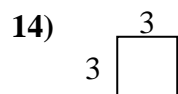
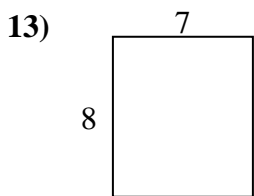
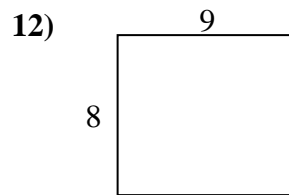
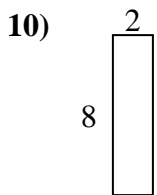
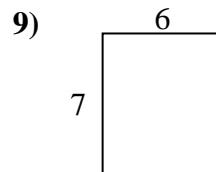
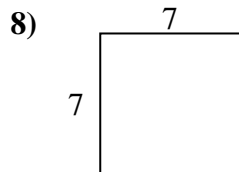
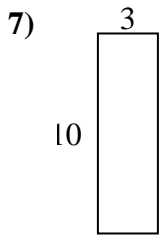
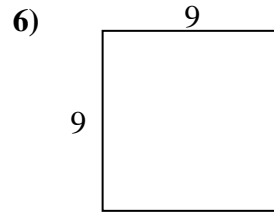
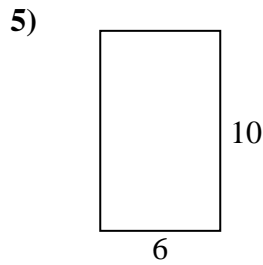
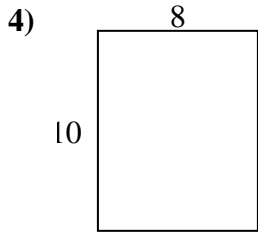
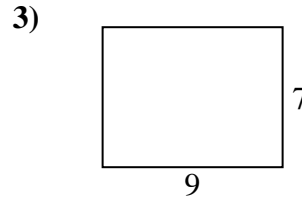
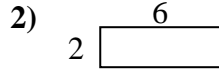
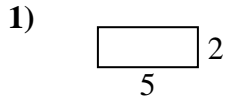
14. _____

15. _____





Find the perimeter and area of each figure. Each figure is in centimeters (cm). Not to scale.



Answers

1. 14 cm 10 cm²
2. 16 cm 12 cm²
3. 32 cm 63 cm²
4. 36 cm 80 cm²
5. 32 cm 60 cm²
6. 36 cm 81 cm²
7. 26 cm 30 cm²
8. 28 cm 49 cm²
9. 26 cm 42 cm²
10. 20 cm 16 cm²
11. 18 cm 18 cm²
12. 34 cm 72 cm²
13. 30 cm 56 cm²
14. 12 cm 9 cm²
15. 34 cm 70 cm²