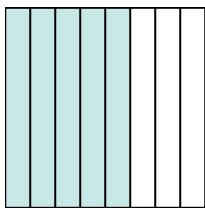




Write the shaded amount in word form.

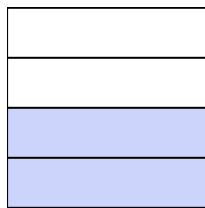
Ex)



1)



2)



**Answers**

Ex.

**five-eighths**

1. \_\_\_\_\_

2. \_\_\_\_\_

3. \_\_\_\_\_

4. \_\_\_\_\_

5. \_\_\_\_\_

6. \_\_\_\_\_

7. \_\_\_\_\_

8. \_\_\_\_\_

9. \_\_\_\_\_

10. \_\_\_\_\_

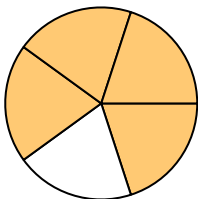
11. \_\_\_\_\_

12. \_\_\_\_\_


13. \_\_\_\_\_

14. \_\_\_\_\_

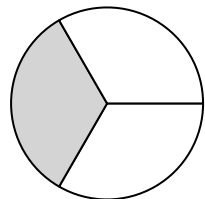
3)



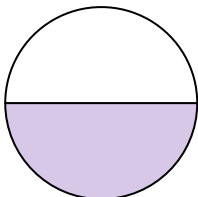
4)




5)



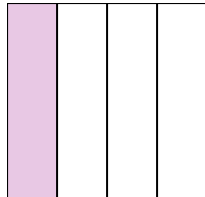
6)




7)




8)



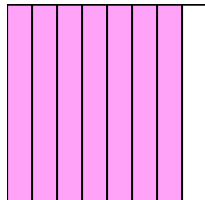
9)



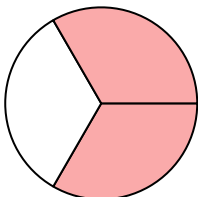
10)




11)




12)



13)

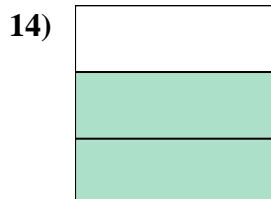

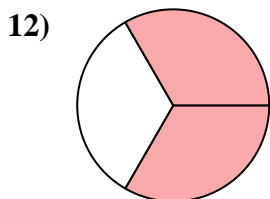
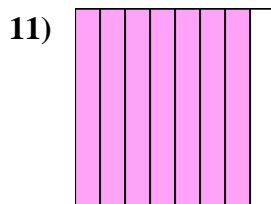
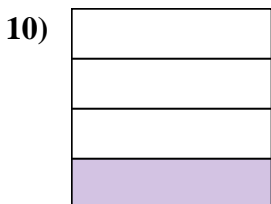

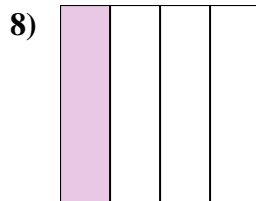
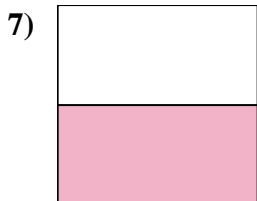
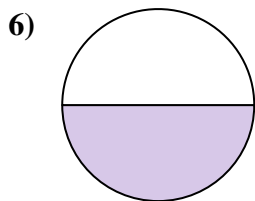
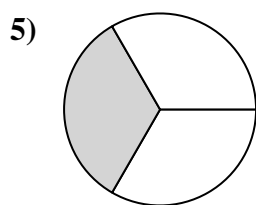

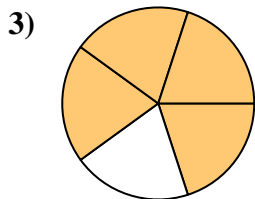
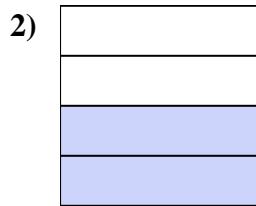
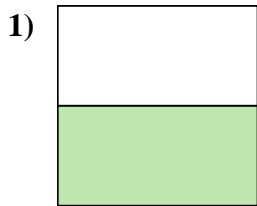
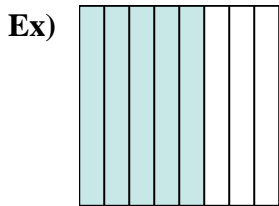


14)





Write the shaded amount in word form.



Answers

Ex. five-eighths

1. one-half

2. two-fourths

3. four-fifths

4. three-fifths

5. one-third

6. one-half

7. one-half

8. one-fourth

9. five-eighths

10. one-fourth

11. seven-eighths

12. two-thirds

13. one-fifth

14. two-thirds