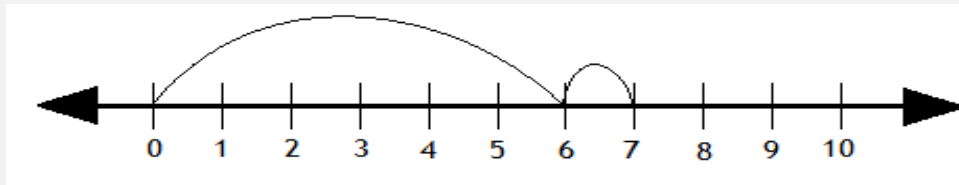


## Adding with number lines

### Grade 1 Addition Worksheet

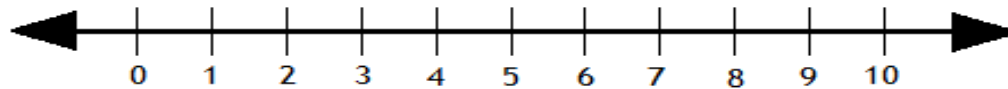
Solve the following by drawing hops on the number line.

**Example:**



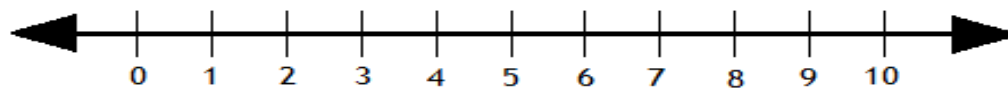
$$6 + 1 = \boxed{7}$$

1.



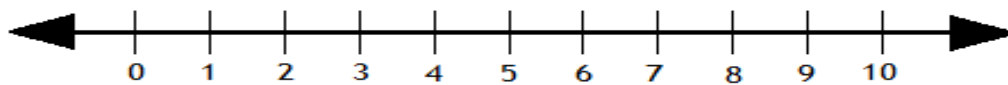
$$7 + 1 = \boxed{\phantom{00}}$$

2.



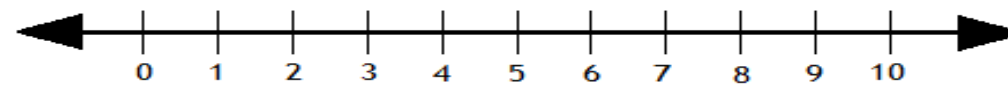
$$1 + 9 = \boxed{\phantom{00}}$$

3.



$$5 + 4 = \boxed{\phantom{00}}$$

4.



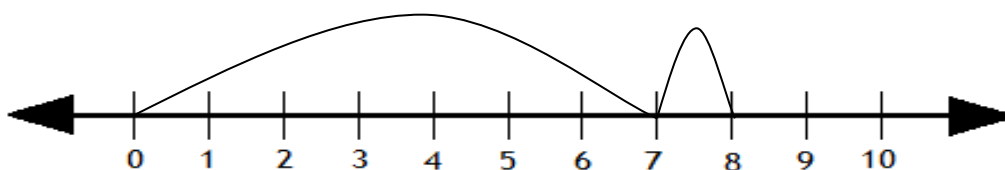
$$1 + 3 = \boxed{\phantom{00}}$$

# Adding with number lines

## Grade 1 Addition Worksheet

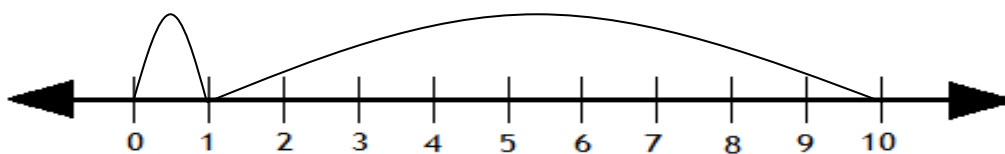
### Answers

1.



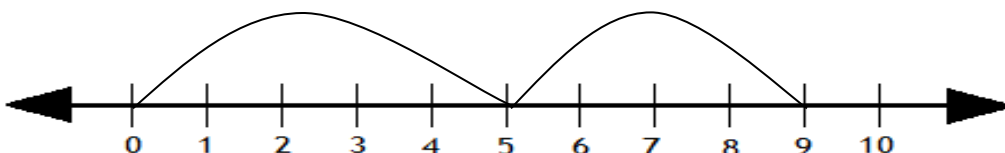
$$7 + 1 = \boxed{8}$$

2.



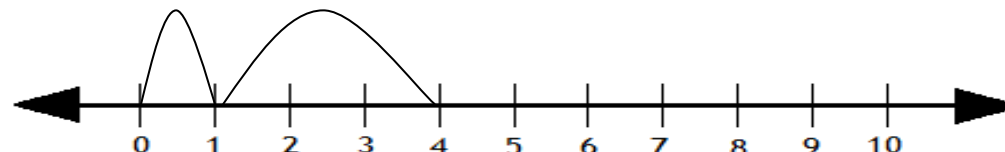
$$1 + 9 = \boxed{10}$$

3.



$$5 + 4 = \boxed{9}$$

4.



$$1 + 3 = \boxed{4}$$