



## Subtraction using pictures

### Grade 1 Subtraction Worksheet

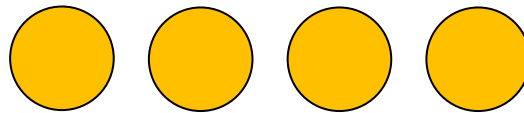
Cross out the shapes according to the number sentences. Then, find the answers.



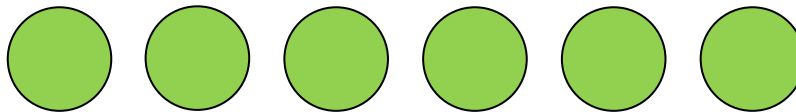
$$5 - 3 = \underline{\quad}$$



$$7 - 6 = \underline{\quad}$$



$$4 - 2 = \underline{\quad}$$




$$6 - 1 = \underline{\quad}$$

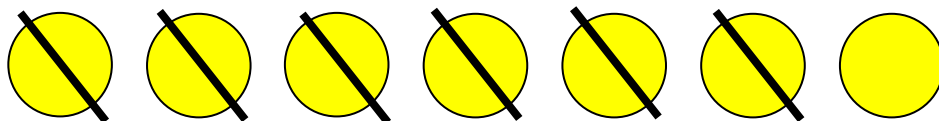


$$9 - 5 = \underline{\quad}$$


## Answers



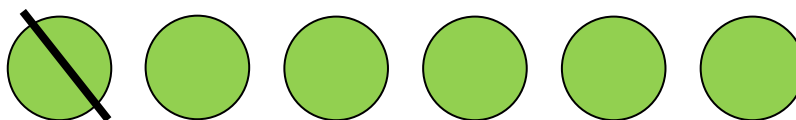
$$5 - 3 = 2$$



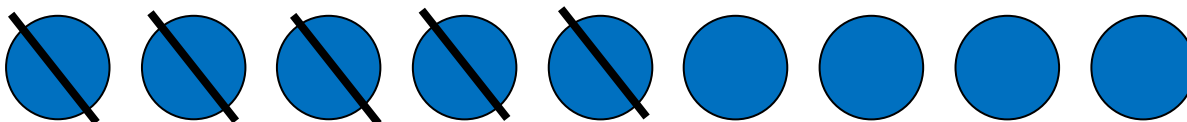
$$7 - 6 = 1$$



$$4 - 2 = 2$$



$$6 - 1 = 5$$



$$9 - 5 = 4$$