


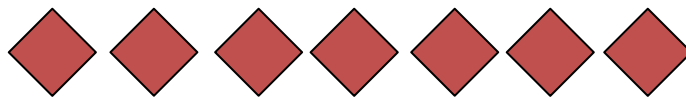
Subtraction using pictures

Grade 1 Subtraction Worksheet

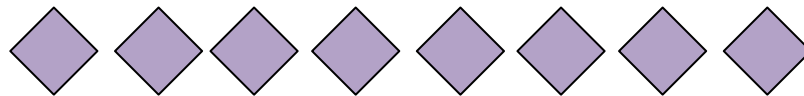
Cross out the shapes according to the number sentences. Then, find the answers.



$$10 - 2 = \underline{\quad}$$



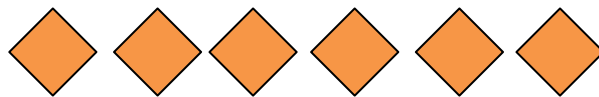
$$7 - 5 = \underline{\quad}$$



$$8 - 4 = \underline{\quad}$$




$$3 - 2 = \underline{\quad}$$

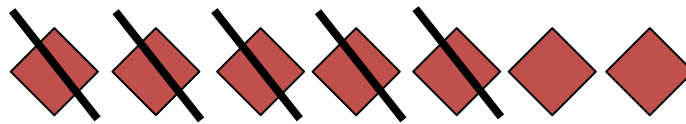


$$6 - 1 = \underline{\quad}$$

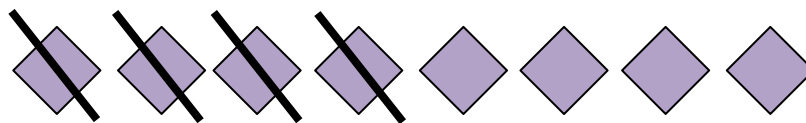
Answers



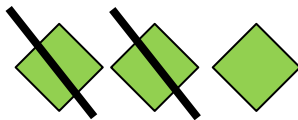
$$10 - 2 = 8$$



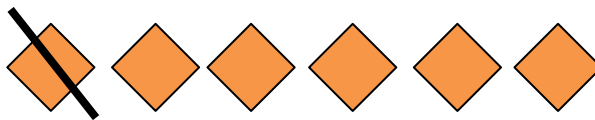
$$7 - 5 = 2$$



$$8 - 4 = 4$$



$$3 - 2 = 1$$



$$6 - 1 = 5$$