





Subtraction using pictures (up to 20)

Grade 1 Subtraction Worksheet

It's a busy day at Jane's Bakery!

Fill in the blanks according to the pictures. Then, complete the number sentences.

	<p>Baker Jane baked _____ cupcakes and sold _____ cupcakes.</p> <p>_____ - _____ = _____</p>
	<p>Baker Jane baked _____ donuts and sold _____ donuts.</p> <p>_____ - _____ = _____</p>
	<p>Baker Jane baked _____ croissants and sold _____ croissants.</p> <p>_____ - _____ = _____</p>
	<p>Baker Jane baked _____ cookies and sold _____ cookies.</p> <p>_____ - _____ = _____</p>

Answers

Baker Jane baked 15 cupcakes and sold 4 cupcakes.

$$15 - 4 = 11$$

Baker Jane baked 13 donuts and sold 8 donuts.

$$13 - 8 = 5$$

Baker Jane baked 16 croissants and sold 10 croissants.

$$16 - 10 = 6$$

Baker Jane baked 15 cookies and sold 9 croissants.

$$15 - 9 = 6$$