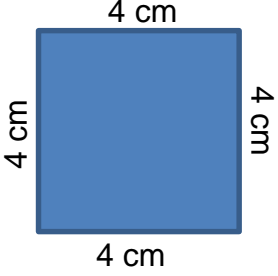

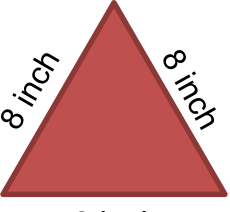
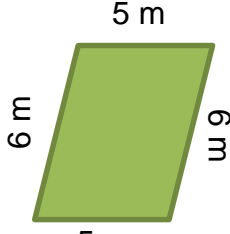
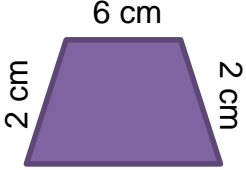
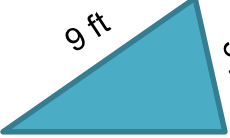
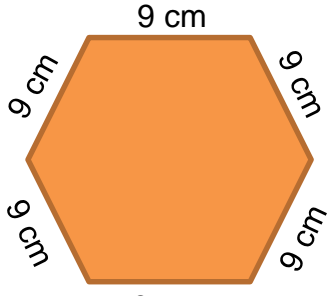

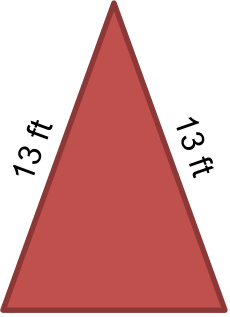


Perimeters of common shapes

Grade 2 Geometry Worksheet

Find the perimeter of the shapes shown below.

 <p>_____</p>	 <p>_____</p>	 <p>_____</p>
 <p>_____</p>	 <p>_____</p>	 <p>_____</p>
 <p>_____</p>	 <p>_____</p>	 <p>_____</p>

Answers

16 cm	16 ft	24 in
22 m	19 cm	21 ft
54 cm	22 m	36 ft