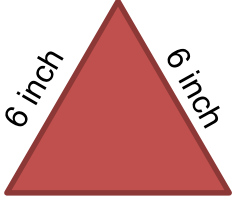
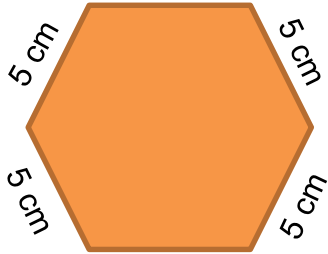


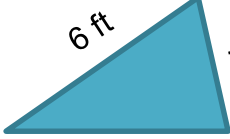
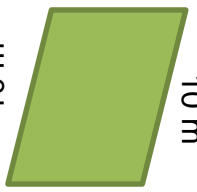

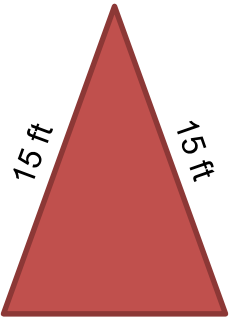



Perimeters of common shapes

Grade 2 Geometry Worksheet

Find the perimeter of the shapes shown below.

 <p>6 inch 6 inch 6 inch</p> <p>_____</p>	 <p>5 cm 5 cm 5 cm 5 cm 5 cm 5 cm</p> <p>_____</p>	 <p>9 m 5 m</p> <p>_____</p>
 <p>2 cm 1 cm 1 cm 5 cm</p> <p>_____</p>	 <p>6 ft 4 ft 8 ft</p> <p>_____</p>	 <p>4 m 10 m 10 m 4 m</p> <p>_____</p>
 <p>8 in 12 in</p> <p>_____</p>	 <p>15 ft 15 ft 12 ft</p> <p>_____</p>	 <p>8 cm 8 cm 8 cm 8 cm</p> <p>_____</p>

Answers

18 in	30 cm	28 m
9 cm	18 ft	28 m
40 in	42 ft	32 cm