

Name _____

Date _____



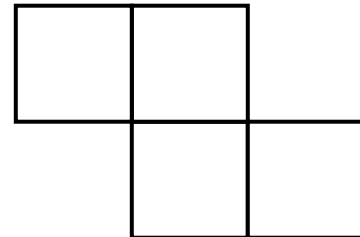
$\frac{1}{2}$

HALVES OF SHAPES SHEET 2

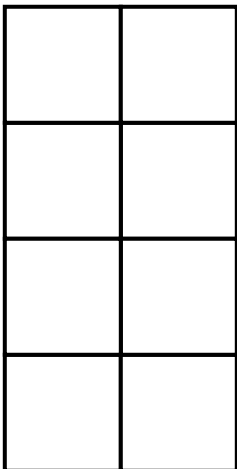
All these shapes are made up of squares joined together. Shade in a half of each of the shapes below, and then write down how many squares are shaded.



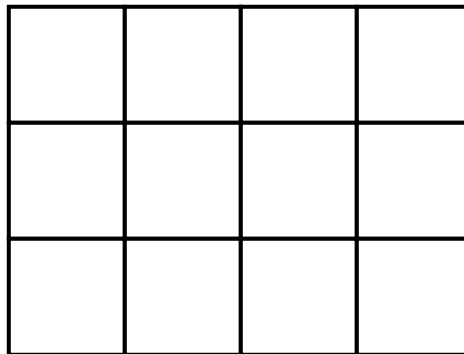
Half of 6 is ____



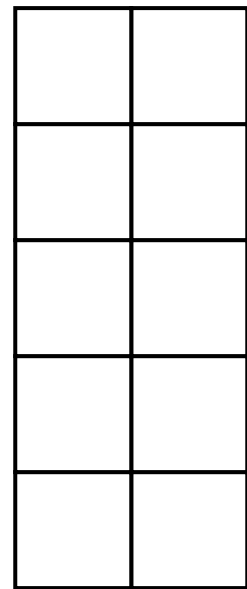
Half of 4 is ____



Half of 8 is ____



Half of 12 is ____



Half of 10 is ____

Remember – when you halve a shape, you split it into two **equal** parts.



Free Math Sheets, Math Games and Math Help

MATH-SALAMANDERS.COM



Name


Date



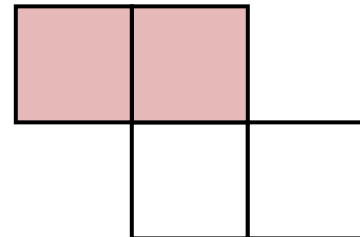
$\frac{1}{2}$

HALVES OF SHAPES SHEET 2 ANSWERS

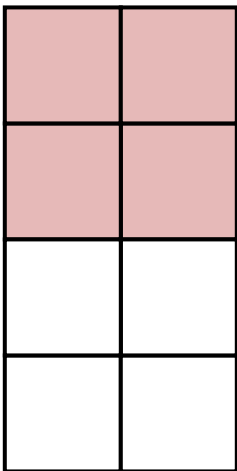
All these shapes are made up of squares joined together. Shade in a half of each of the shapes below, and then write down how many squares are shaded.



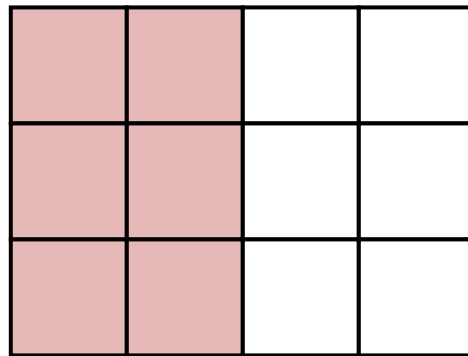
Half of 6 is 3



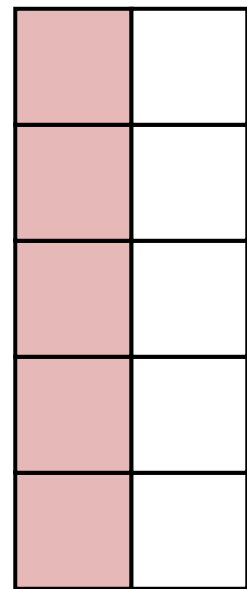
Half of 4 is 2



Half of 8 is 4



Half of 12 is 6



Half of 10 is 5