



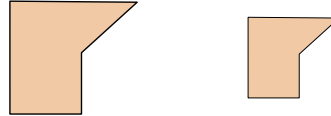
Determine if the shapes shown are 'similar', 'congruent' or 'neither'.

Answers

1)



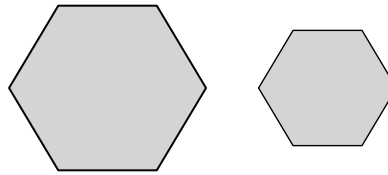
2)



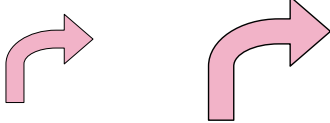
3)



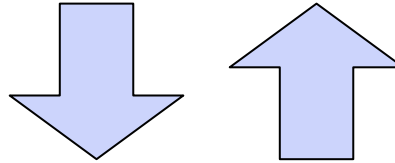
4)



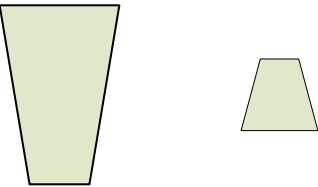
5)



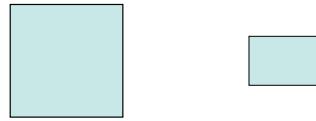
6)



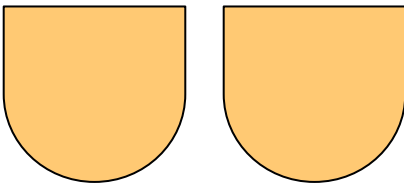
7)



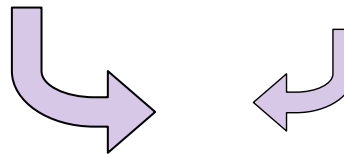
8)



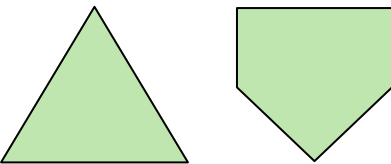
9)



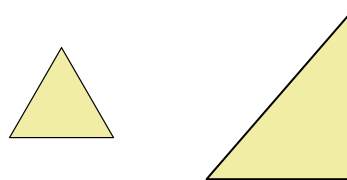
10)



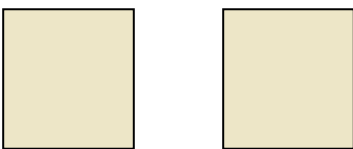
11)



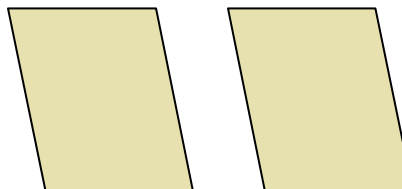
12)




13)




14)



15)



16)



1. _____

2. _____

3. _____

4. _____

5. _____

6. _____

7. _____

8. _____

9. _____

10. _____

11. _____

12. _____

13. _____

14. _____

15. _____

16. _____

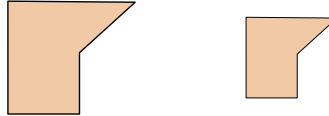


Determine if the shapes shown are 'similar', 'congruent' or 'neither'.

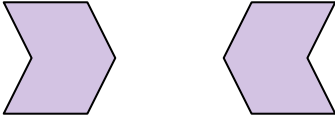
1)



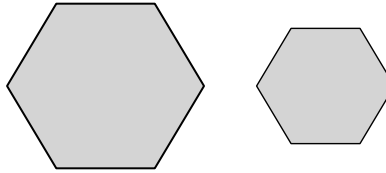
2)



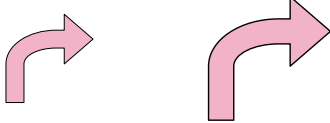
3)



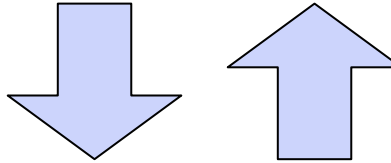
4)



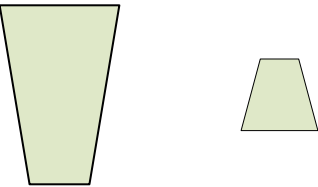
5)



6)



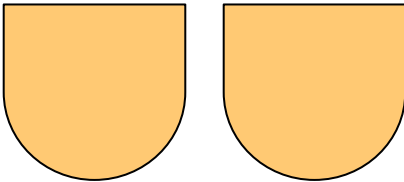
7)



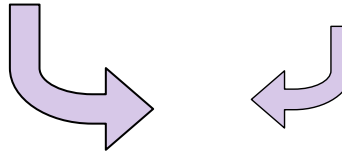
8)



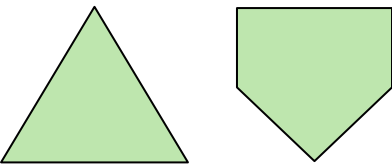
9)



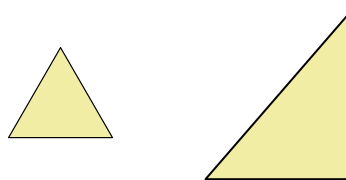
10)



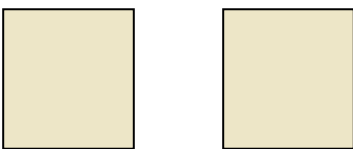
11)



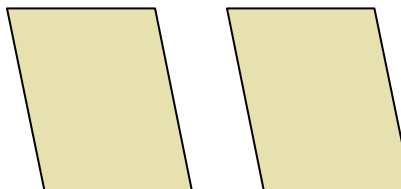
12)




13)




14)



15)



16)



Answers

1. similar

2. similar

3. congruent

4. similar

5. similar

6. congruent

7. neither

8. neither

9. congruent

10. similar

11. neither

12. neither

13. congruent

14. congruent

15. neither

16. neither