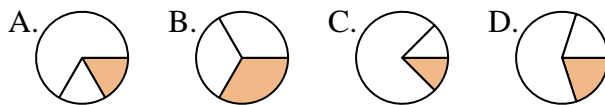




Determine which letter best represents each fraction.

Answers

1) Which choice best shows $\frac{1}{3}$?



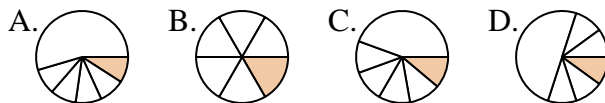
1. _____

2) Which choice best shows $\frac{2}{4}$?



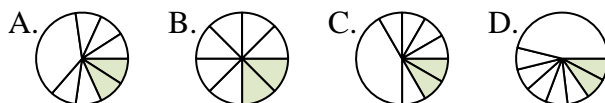
2. _____

3) Which choice best shows $\frac{1}{6}$?



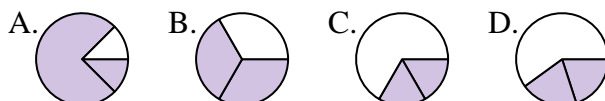
4. _____

4) Which choice best shows $\frac{2}{8}$?



6. _____

5) Which choice best shows $\frac{2}{3}$?



7. _____

6) Which choice best shows $\frac{1}{4}$?



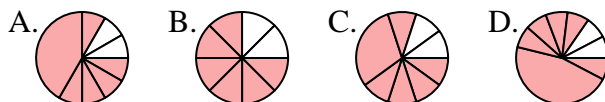
9. _____

7) Which choice best shows $\frac{3}{6}$?



11. _____

8) Which choice best shows $\frac{6}{8}$?

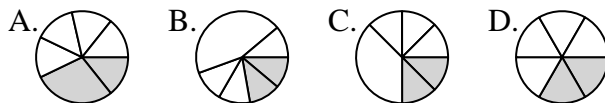


12. _____

9) Which choice best shows $\frac{3}{4}$?



10) Which choice best shows $\frac{2}{6}$?



11) Which choice best shows $\frac{3}{8}$?



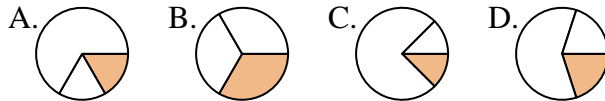
12) Which choice best shows $\frac{4}{6}$?



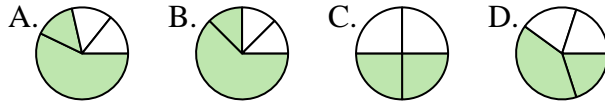


Determine which letter best represents each fraction.

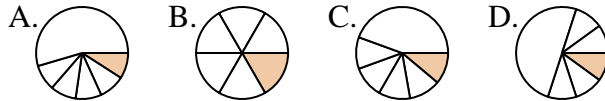
1) Which choice best shows $\frac{1}{3}$?



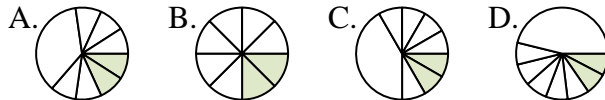
2) Which choice best shows $\frac{2}{4}$?



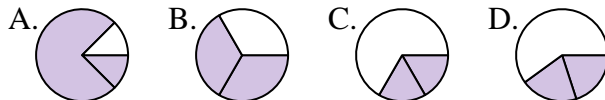
3) Which choice best shows $\frac{1}{6}$?



4) Which choice best shows $\frac{2}{8}$?



5) Which choice best shows $\frac{2}{3}$?



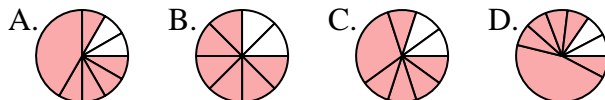
6) Which choice best shows $\frac{1}{4}$?



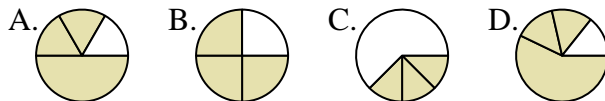
7) Which choice best shows $\frac{3}{6}$?



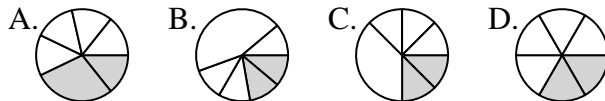
8) Which choice best shows $\frac{6}{8}$?



9) Which choice best shows $\frac{3}{4}$?



10) Which choice best shows $\frac{2}{6}$?



11) Which choice best shows $\frac{3}{8}$?



12) Which choice best shows $\frac{4}{6}$?



Answers

1. **B**

2. **C**

3. **B**

4. **B**

5. **B**

6. **C**

7. **C**

8. **B**

9. **B**

10. **D**

11. **A**

12. **A**