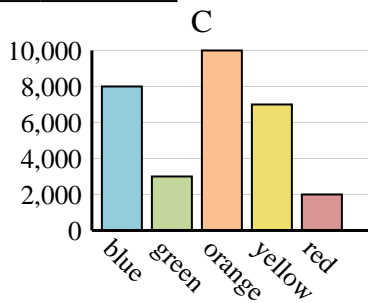
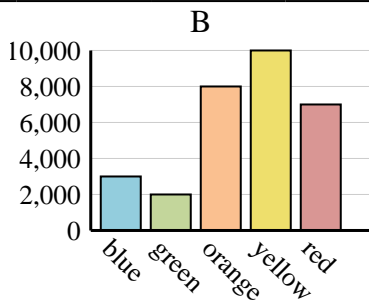
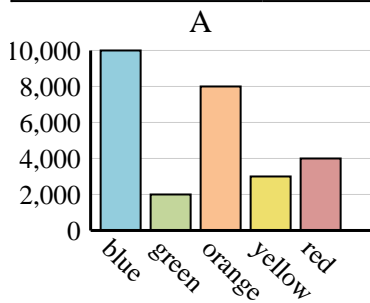




Determine which graph (A, B or C) best represents the information in the table.

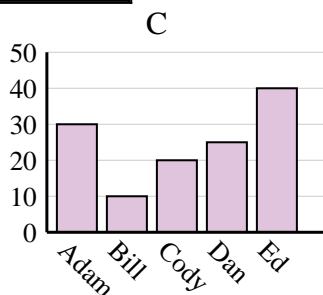
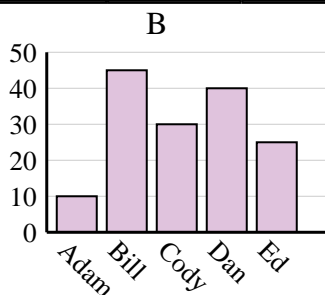
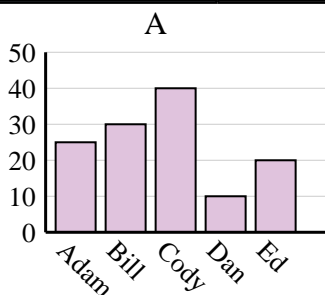
**Answers**

Favorite Color	blue	green	orange	yellow	red
People	10,000	2,000	8,000	3,000	4,000

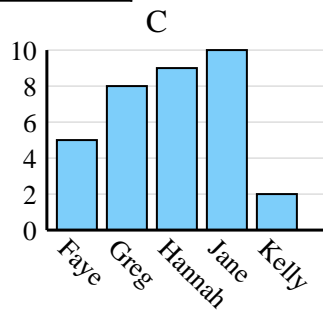
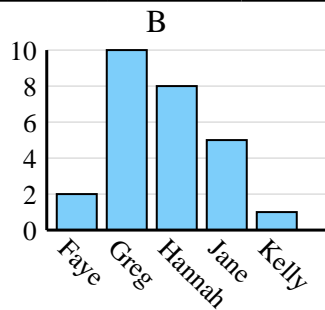
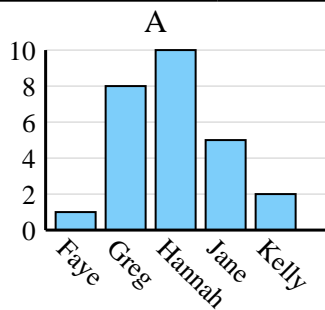


1. \_\_\_\_\_
2. \_\_\_\_\_
3. \_\_\_\_\_
4. \_\_\_\_\_

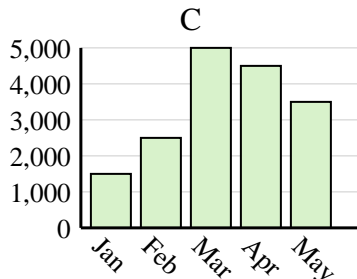
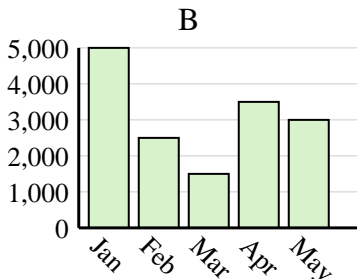
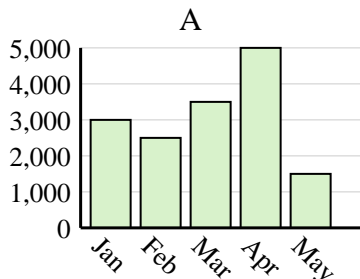
Name	Adam	Bill	Cody	Dan	Ed
Points	10	45	30	40	25



Name	Faye	Greg	Hannah	Jane	Kelly
States Lived In	5	8	9	10	2



Sales	Jan	Feb	Mar	Apr	May
Month	1,500	2,500	5,000	4,500	3,500

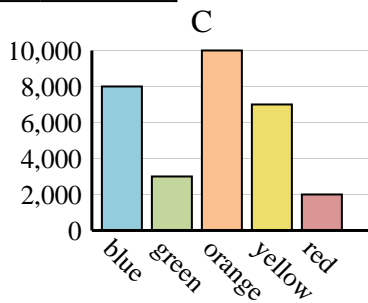
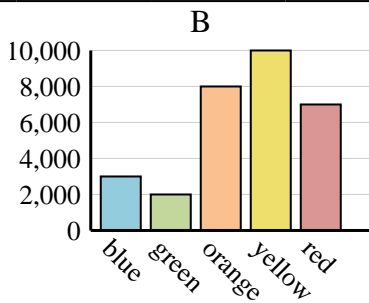
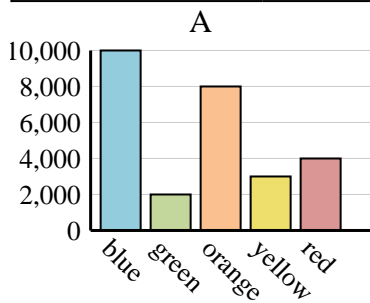




Determine which graph (A, B or C) best represents the information in the table.

**Answers**

Favorite Color	blue	green	orange	yellow	red
People	10,000	2,000	8,000	3,000	4,000



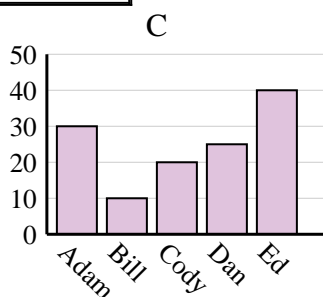
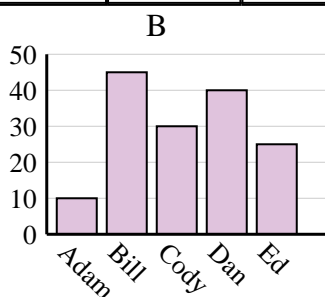
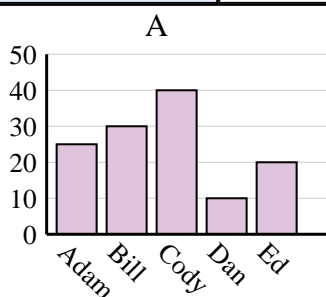
1. **A**

2. **B**

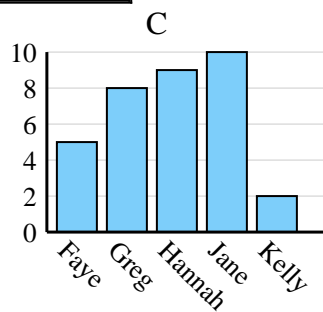
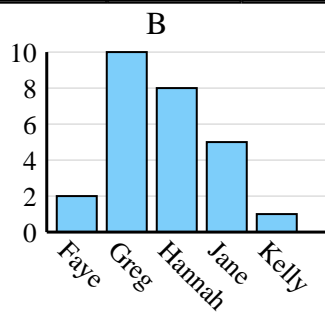
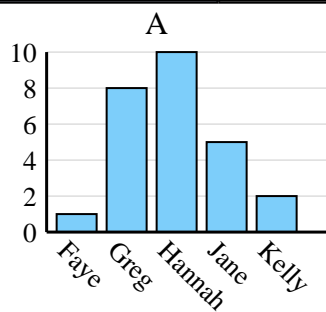
3. **C**

4. **C**

Name	Adam	Bill	Cody	Dan	Ed
Points	10	45	30	40	25



Name	Faye	Greg	Hannah	Jane	Kelly
States Lived In	5	8	9	10	2



Sales	Jan	Feb	Mar	Apr	May
Month	1,500	2,500	5,000	4,500	3,500

