

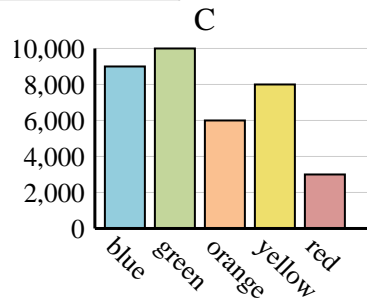
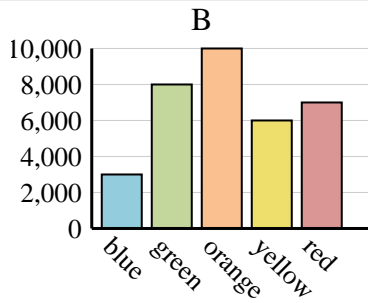
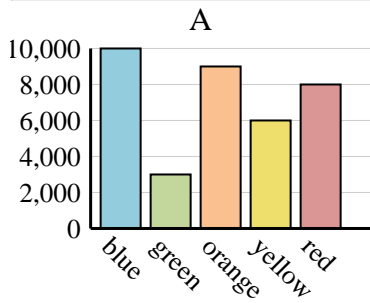


Determine which graph (A, B or C) best represents the information in the table.

Answers

1)

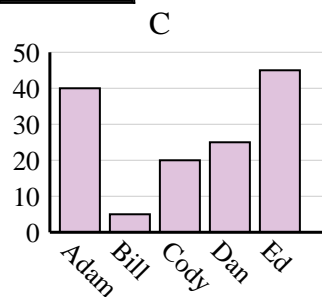
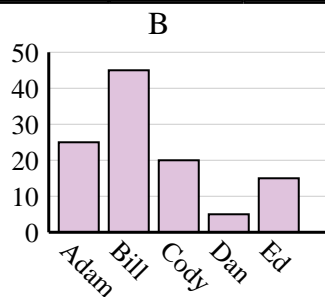
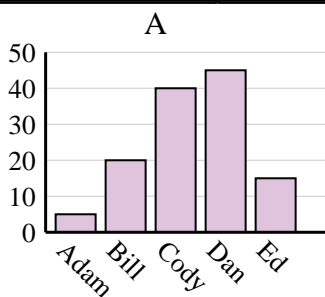
Favorite Color	blue	green	orange	yellow	red
People	9,000	10,000	6,000	8,000	3,000



1. _____
2. _____
3. _____
4. _____

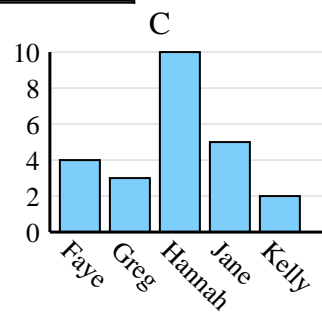
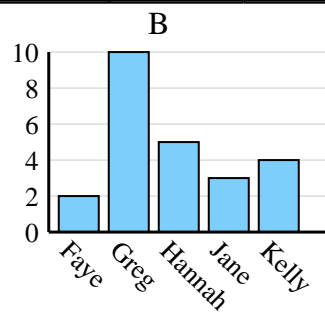
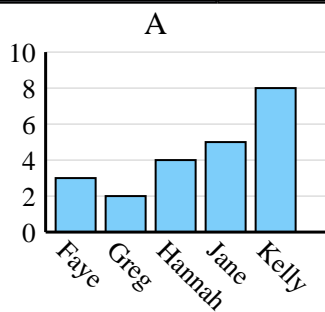
2)

Name	Adam	Bill	Cody	Dan	Ed
Points	25	45	20	5	15



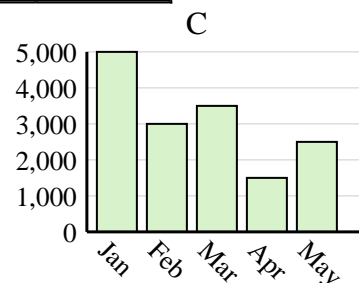
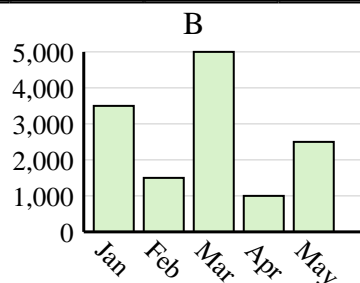
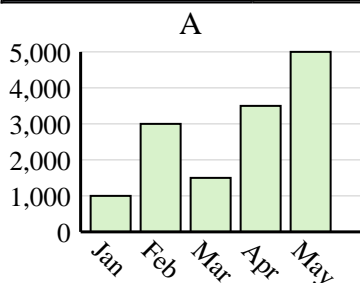
3)

Name	Faye	Greg	Hannah	Jane	Kelly
States Lived In	3	2	4	5	8



4)

Sales	Jan	Feb	Mar	Apr	May
Month	1,000	3,000	1,500	3,500	5,000

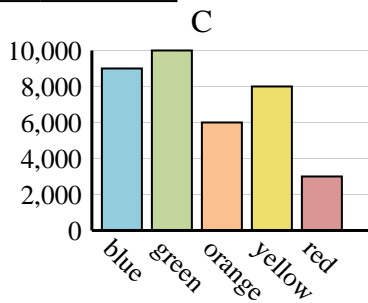
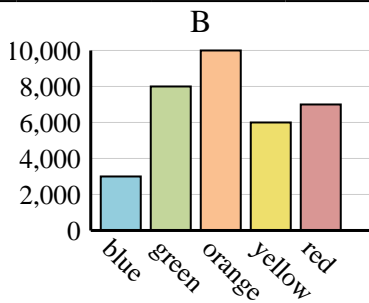
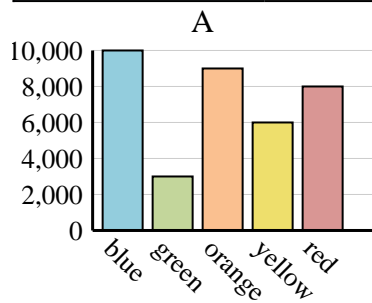




Determine which graph (A, B or C) best represents the information in the table.

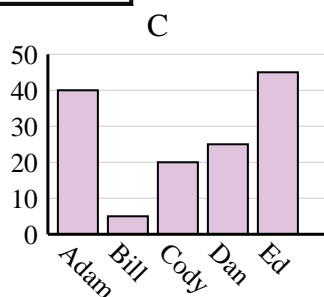
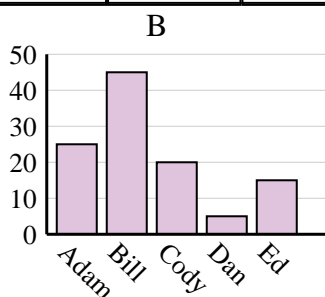
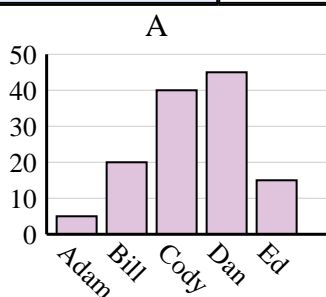
Answers

Favorite Color	blue	green	orange	yellow	red
People	9,000	10,000	6,000	8,000	3,000



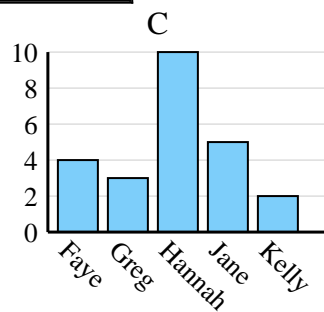
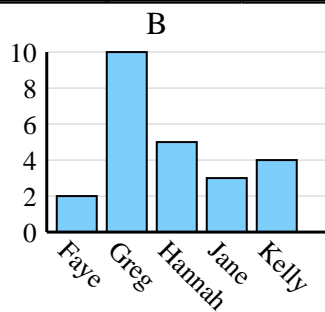
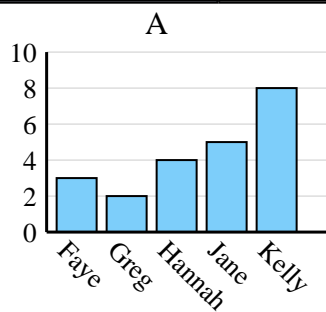
1. **C**

Name	Adam	Bill	Cody	Dan	Ed
Points	25	45	20	5	15



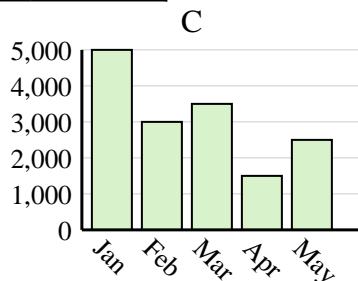
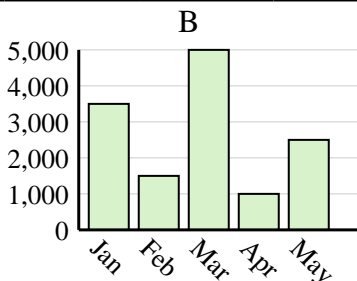
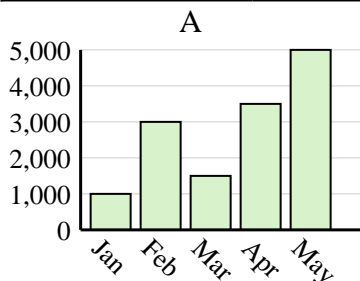
2. **B**

Name	Faye	Greg	Hannah	Jane	Kelly
States Lived In	3	2	4	5	8



3. **A**

Sales	Jan	Feb	Mar	Apr	May
Month	1,000	3,000	1,500	3,500	5,000



4. **A**