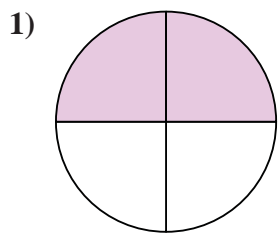


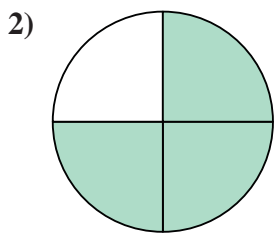


Determine which letter best describes the shaded portion.

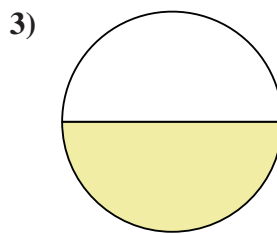
Answers



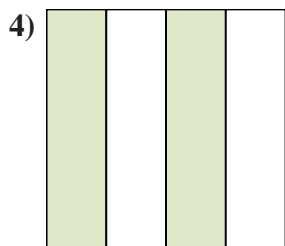
- A. Three Quarters
- B. Two Quarters
- C. One Quarter



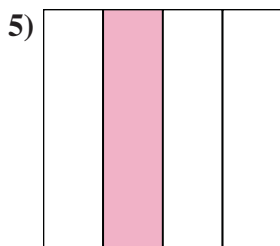
- A. One Quarter
- B. Two Quarters
- C. Three Quarters



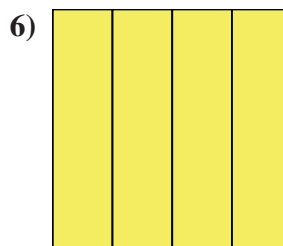
- A. One Quarter
- B. One Half
- C. Three Quarters



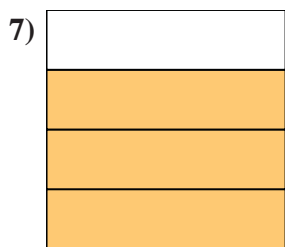
- A. Three Quarters
- B. One Quarter
- C. Two-Fourths



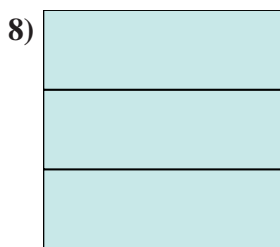
- A. Two Quarters
- B. One Quarter
- C. Three Quarters



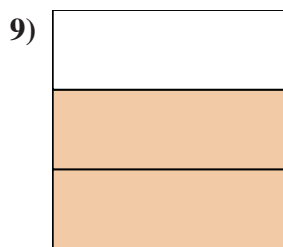
- A. Four Quarters
- B. Two Quarters
- C. One Quarter



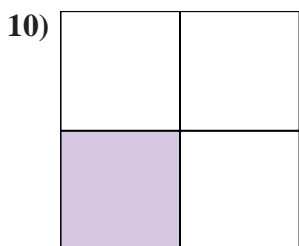
- A. Two Quarters
- B. One Quarter
- C. Three-Fourths



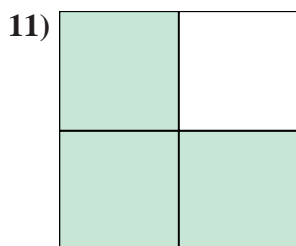
- A. Three-Thirds
- B. One Quarter
- C. Two Quarters



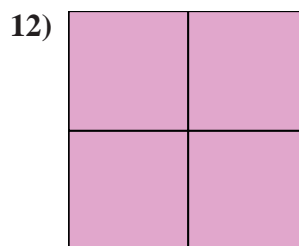
- A. Two-Thirds
- B. One Quarter
- C. Two Quarters



- A. Three Quarters
- B. One-Fourth
- C. Two Quarters



- A. Three Quarters
- B. Two Quarters
- C. One Quarter

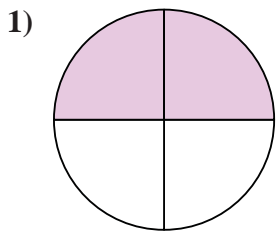


- A. Four-Fourths
- B. Two Quarters
- C. One Quarter

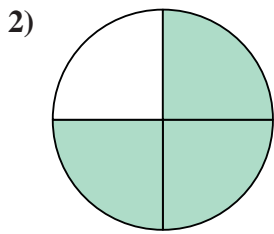
- 1. _____
- 2. _____
- 3. _____
- 4. _____
- 5. _____
- 6. _____
- 7. _____
- 8. _____
- 9. _____
- 10. _____
- 11. _____
- 12. _____



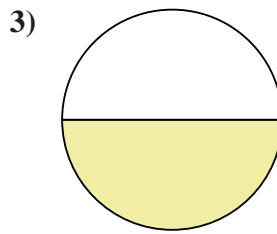
Determine which letter best describes the shaded portion.



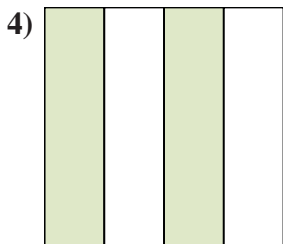
- A. Three Quarters
- B. Two Quarters
- C. One Quarter



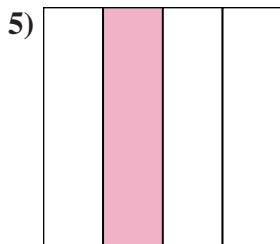
- A. One Quarter
- B. Two Quarters
- C. Three Quarters



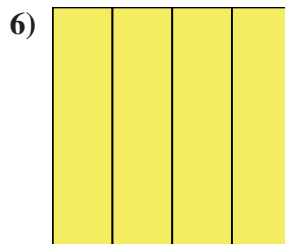
- A. One Quarter
- B. One Half
- C. Three Quarters



- A. Three Quarters
- B. One Quarter
- C. Two-Fourths




- A. Two Quarters
- B. One Quarter
- C. Three Quarters



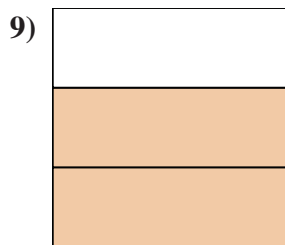
- A. Four Quarters
- B. Two Quarters
- C. One Quarter



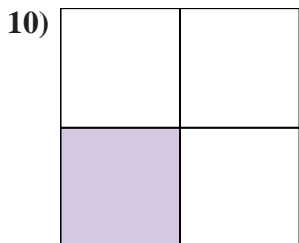
- A. Two Quarters
- B. One Quarter
- C. Three-Fourths



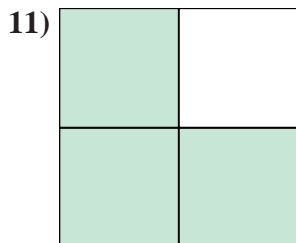
- A. Three-Thirds
- B. One Quarter
- C. Two Quarters



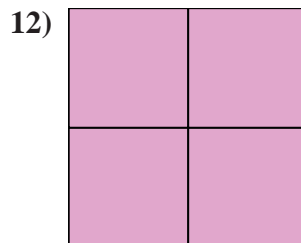
- A. Two-Thirds
- B. One Quarter
- C. Two Quarters



- A. Three Quarters
- B. One-Fourth
- C. Two Quarters



- A. Three Quarters
- B. Two Quarters
- C. One Quarter



- A. Four-Fourths
- B. Two Quarters
- C. One Quarter

Answers

1. **B**

2. **C**

3. **B**

4. **C**

5. **B**

6. **A**

7. **C**

8. **A**

9. **A**

10. **B**

11. **A**

12. **A**