

Name \_\_\_\_\_

Date \_\_\_\_\_




## PERIMETER SHEET 3

Work out the perimeter of the following rectangles. They are not to scale.

1)

9cm



3cm

Perimeter = \_\_\_\_\_ cm

2)

6in




4in

Perimeter = \_\_\_\_\_ in

3)

7ft



7ft

Perimeter = \_\_\_\_\_ ft

4)

10m



4m

Perimeter = \_\_\_\_\_ m

5)

8m




7m

Perimeter = \_\_\_\_\_ m

6)

2½cm



2½cm

Perimeter = \_\_\_\_\_ cm



Name

Date



# PERIMETER SHEET 3 ANSWERS

1)

9cm




3cm

Perimeter = 24 cm

2)

6in




4in

Perimeter = 20 in

3)

7ft




7ft

Perimeter = 28 ft

4)

10m



4m

Perimeter = 28 m

5)

8m




7m

Perimeter = 30 m

6)

2½cm



2½cm

Perimeter = 10 cm

