


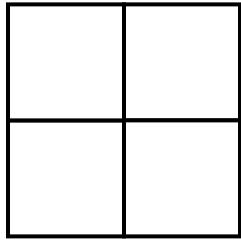
Name _____

Date _____

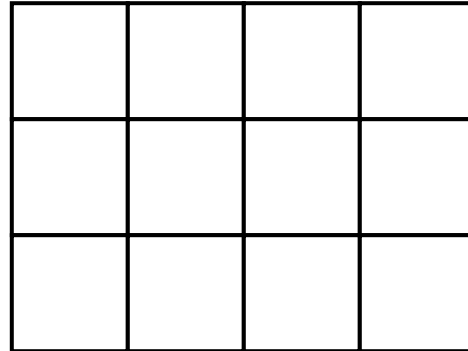


QUARTER OF SHAPES 2

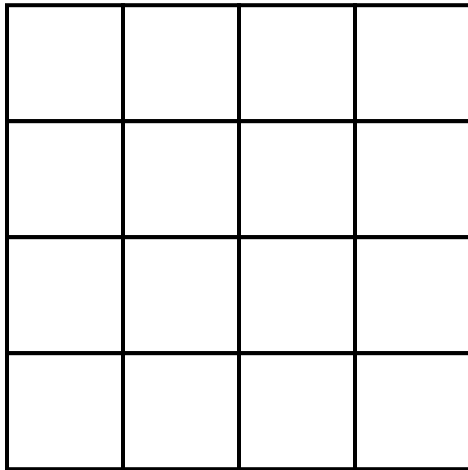
All these shapes are made up of squares joined together. Shade in a quarter of each of the shapes below, and then write down how many squares are shaded.



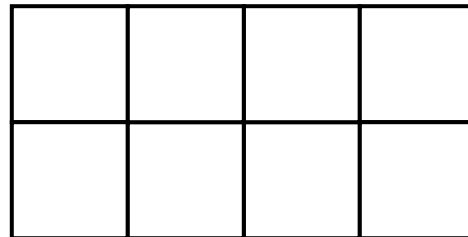
Quarter of 4 is ____



Quarter of 12 is ____



Quarter of 16 is ____




Quarter of 8 is ____

Remember – when you quarter a shape, you split it into **four equal** parts, and shade one out of 4.


Name

Date

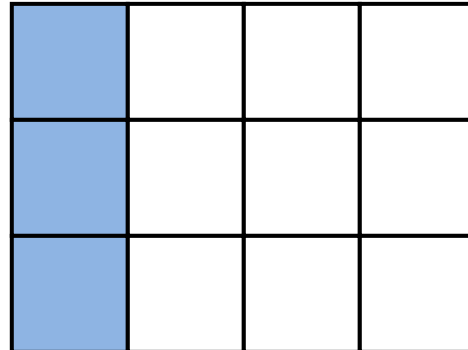


QUARTER OF SHAPES 2 ANSWERS

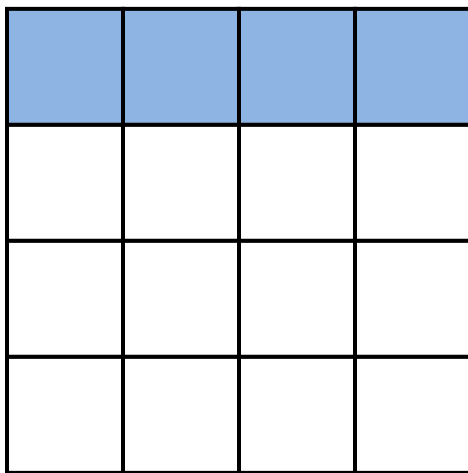
All these shapes are made up of squares joined together. Shade in a quarter of each of the shapes below, and then write down how many squares are shaded.



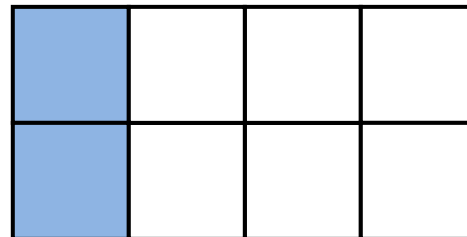
Quarter of 4 is 1



Quarter of 12 is 3



Quarter of 16 is 4



Quarter of 8 is 2

There are many different ways of shading quarter of each of these shapes but the answer in red will always be the same.