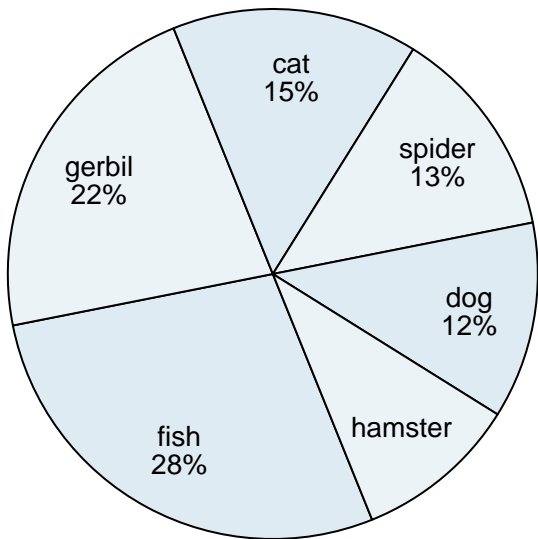




Use the graph to solve.

**Answers**

Favorite Pet




- 1) Which pet did the greatest number of people like?
- 2) Which pet did the least amount of people say was their favorite?
- 3) What percent of people said the hamster was their favorite pet?
- 4) What percent of people preferred either the cat or the hamster?
- 5) Which two pets did about half the people say was their favorite?

1. \_\_\_\_\_
2. \_\_\_\_\_
3. \_\_\_\_\_
4. \_\_\_\_\_
5. \_\_\_\_\_
6. \_\_\_\_\_
7. \_\_\_\_\_
8. \_\_\_\_\_
9. \_\_\_\_\_
10. \_\_\_\_\_

- 6) The most time was spent on which subject?
- 7) The least time was spent on which subject?
- 8) What percent of the time was spent working on english?
- 9) What is the combined amount of time spent on social studies and reading?
- 10) Which two subjects accounted for about half the time spent?

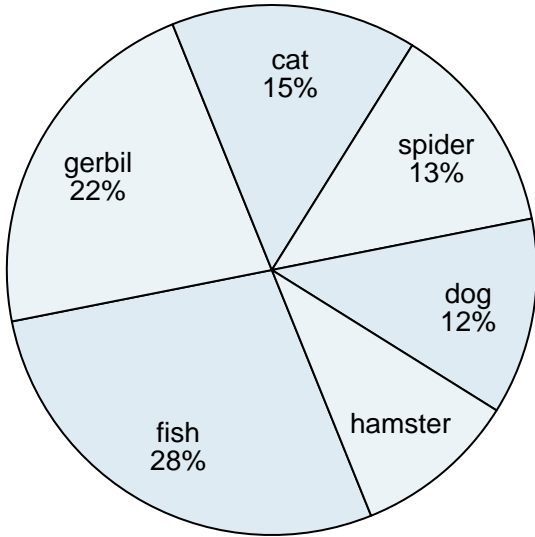
Time Spent on Homework





Use the graph to solve.

Favorite Pet



- 1) Which pet did the greatest number of people like?
- 2) Which pet did the least amount of people say was their favorite?
- 3) What percent of people said the hamster was their favorite pet?
- 4) What percent of people preferred either the cat or the hamster?
- 5) Which two pets did about half the people say was their favorite?

Answers

1. fish
2. hamster
3. 10%
4. 25%
5. fish & gerbil
6. social studies
7. math
8. 22%
9. 42%
10. social studies & english

- 6) The most time was spent on which subject?
- 7) The least time was spent on which subject?
- 8) What percent of the time was spent working on english?
- 9) What is the combined amount of time spent on social studies and reading?
- 10) Which two subjects accounted for about half the time spent?

Time Spent on Homework

