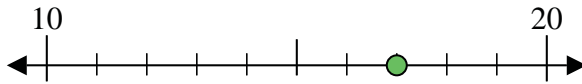


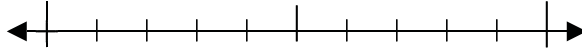


Use the numberlines to round each number to the nearest 10.

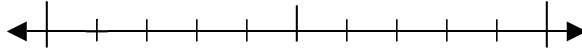
Ex) 17



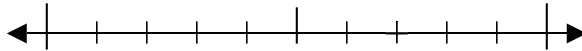
1) 50



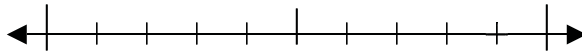
2) 51



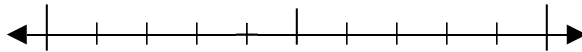
3) 27



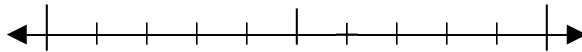
4) 79



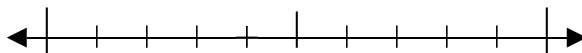
5) 294



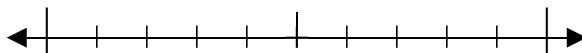
6) 746



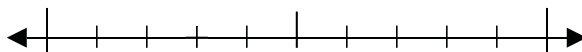
7) 694



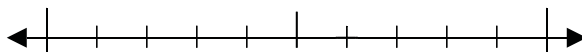
8) 685



9) 3,343



10) 8,056



Answers

Ex. 20

1. _____

2. _____

3. _____

4. _____

5. _____

6. _____

7. _____

8. _____

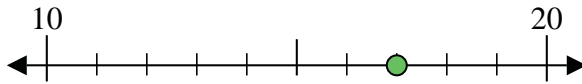
9. _____

10. _____

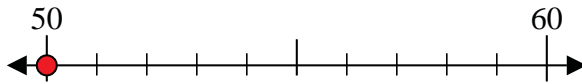


Use the numberlines to round each number to the nearest 10.

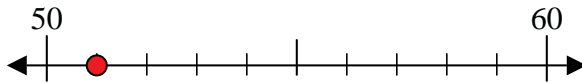
Ex) 17



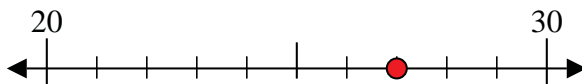
1) 50



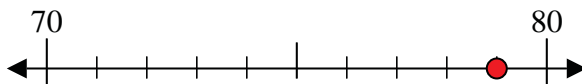
2) 51



3) 27



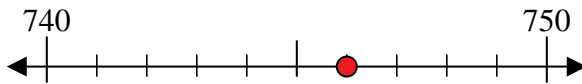
4) 79



5) 294



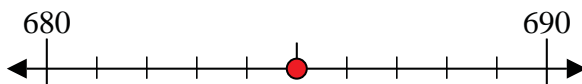
6) 746



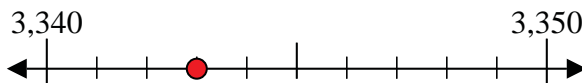
7) 694



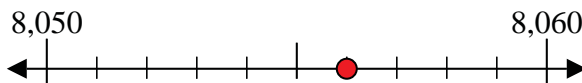
8) 685



9) 3,343



10) 8,056



Answers

Ex. 20

1. 50

2. 50

3. 30

4. 80

5. 290

6. 750

7. 690

8. 690

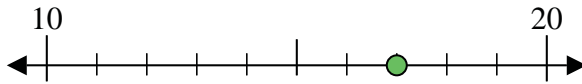
9. 3,340

10. 8,060

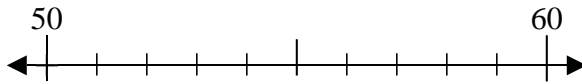


Use the numberlines to round each number to the nearest 10.

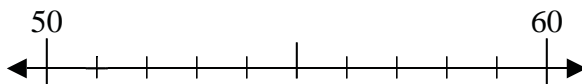
Ex) 17



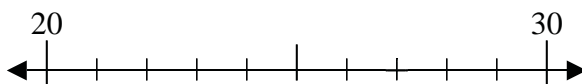
1) 50



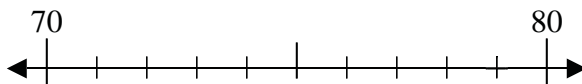
2) 51



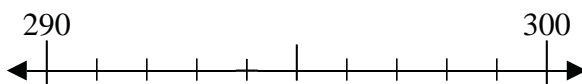
3) 27



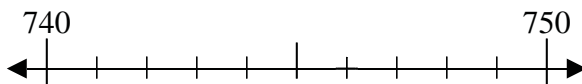
4) 79



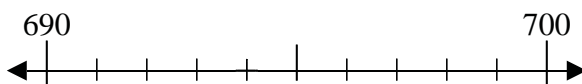
5) 294



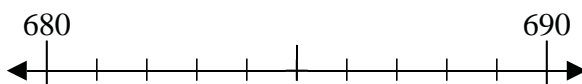
6) 746



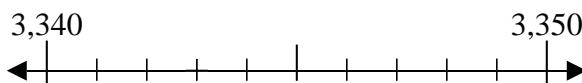
7) 694



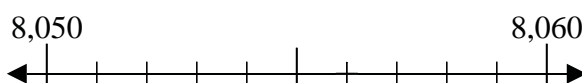
8) 685



9) 3,343



10) 8,056



Answers

Ex. 20

1. _____

2. _____

3. _____

4. _____

5. _____

6. _____

7. _____

8. _____

9. _____

10. _____