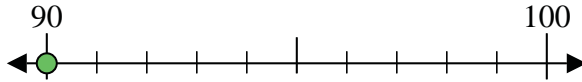


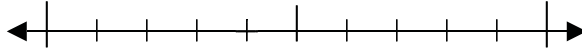


Use the numberlines to round each number to the nearest 10.

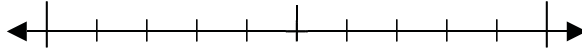
Ex) 90



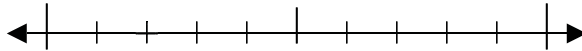
1) 94



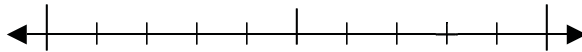
2) 85



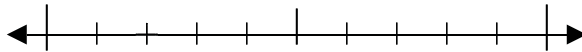
3) 32



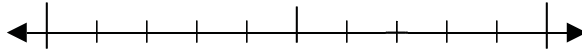
4) 48



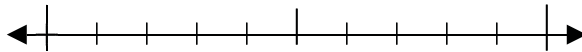
5) 822



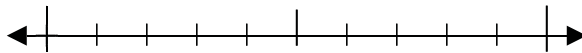
6) 387



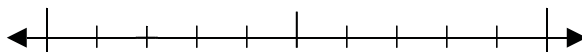
7) 370



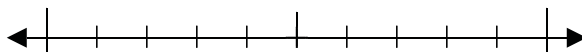
8) 810



9) 3,672



10) 5,985



Answers

Ex. 90

1. _____

2. _____

3. _____

4. _____

5. _____

6. _____

7. _____

8. _____

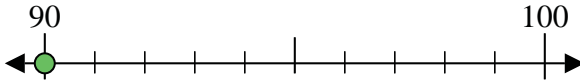
9. _____

10. _____

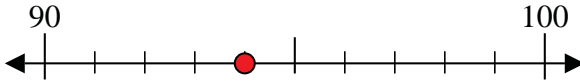


Use the numberlines to round each number to the nearest 10.

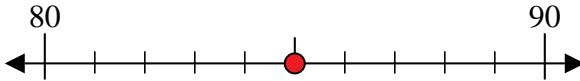
Ex) 90



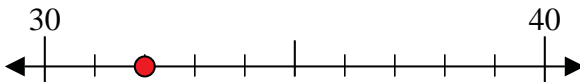
1) 94



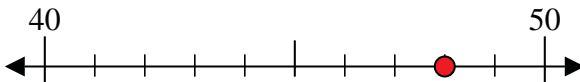
2) 85



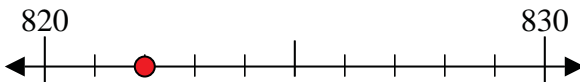
3) 32



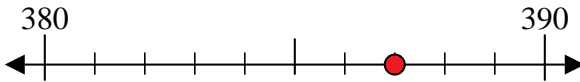
4) 48



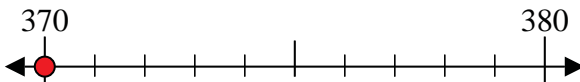
5) 822



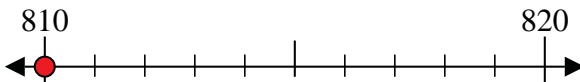
6) 387



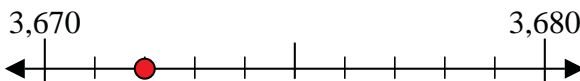
7) 370



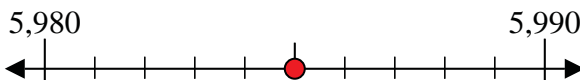
8) 810



9) 3,672



10) 5,985



Answers

Ex. 90

1. 90

2. 90

3. 30

4. 50

5. 820

6. 390

7. 370

8. 810

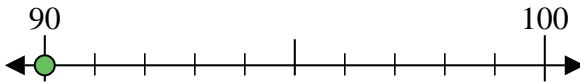
9. 3,670

10. 5,990

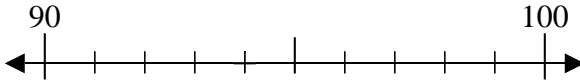


Use the numberlines to round each number to the nearest 10.

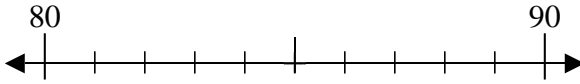
Ex) 90



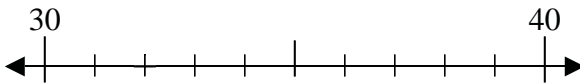
1) 94



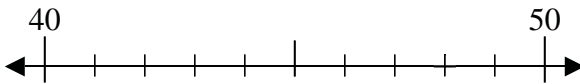
2) 85



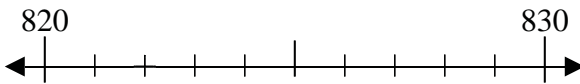
3) 32



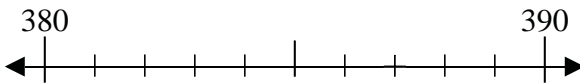
4) 48



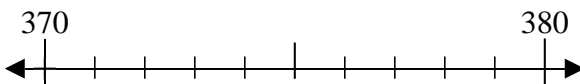
5) 822



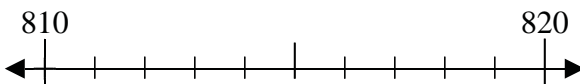
6) 387



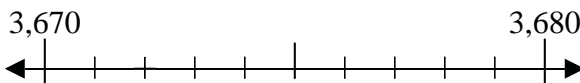
7) 370



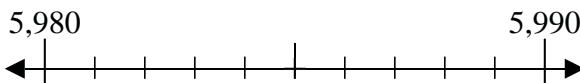
8) 810



9) 3,672



10) 5,985



Answers

Ex. 90

1. _____

2. _____

3. _____

4. _____

5. _____

6. _____

7. _____

8. _____

9. _____

10. _____