

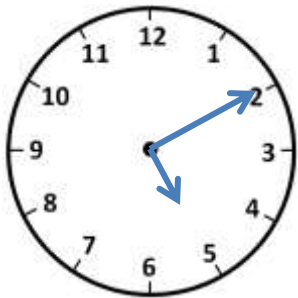
Name

Date

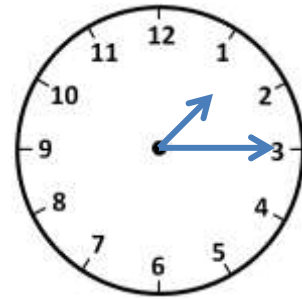


TELLING THE TIME TO 5 MINUTES SHEET 1

Draw lines to match the correct digital time to each clock.

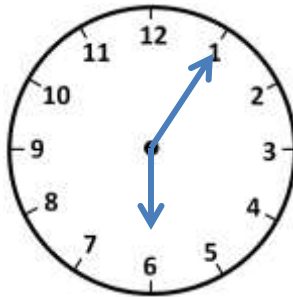


7:40

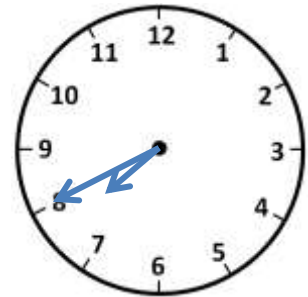


1:15

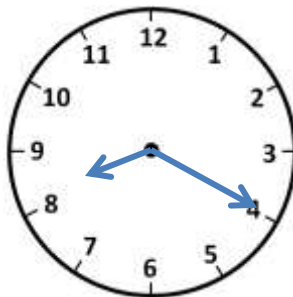
6:05



5:10



8:20



10:45

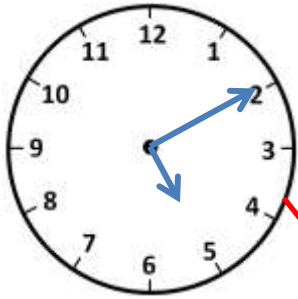


Name

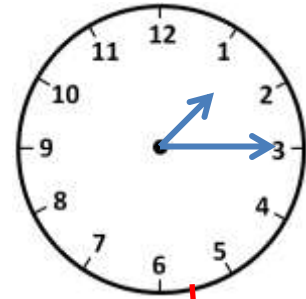
Date



TELLING THE TIME TO 5 MINUTES SHEET 1 ANSWERS



7:40

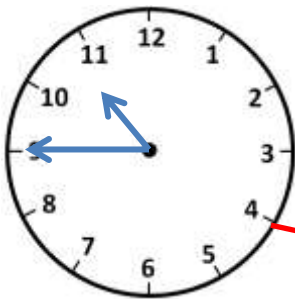
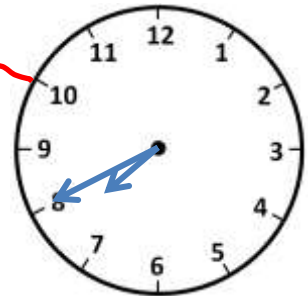


1:15

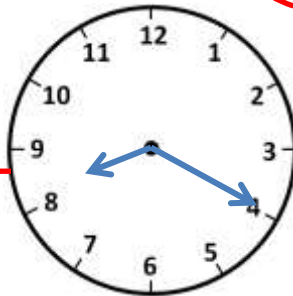
6:05



5:10



8:20



10:45



Free Math Sheets, Math Games and Math Help

MATH-SALAMANDERS.COM

