

Name

Date



TRIANGLE CLASSIFICATION 1

ACUTE, OBTUSE OR RIGHT?

For each triangle, shade in the acute angles yellow, the obtuse angles green and the right angles red. Write down whether it is an acute, obtuse or a right angle triangle.

Acute Triangle (all acute angles)	Obtuse Triangle (1 obtuse angle)	Right Triangle (1 right angle)

1)	2)	3)
Type:	Type:	Type:
4)	5)	6)
Type:	Type:	Type:



Free Math Sheets, Math Games and Math Help

MATH-SALAMANDERS.COM

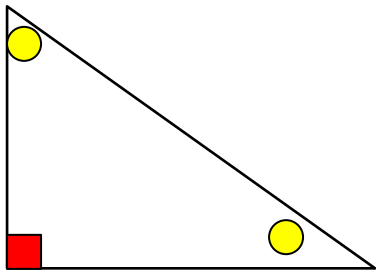
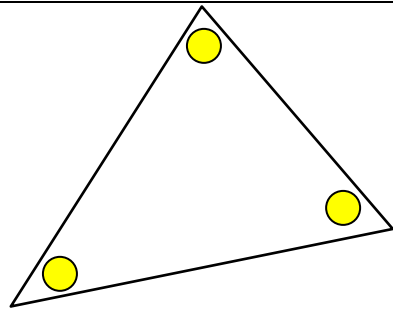
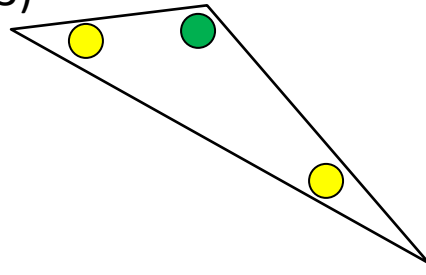
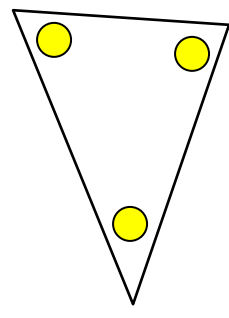
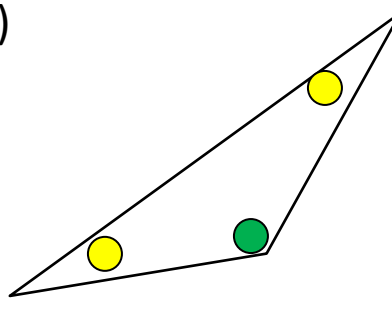
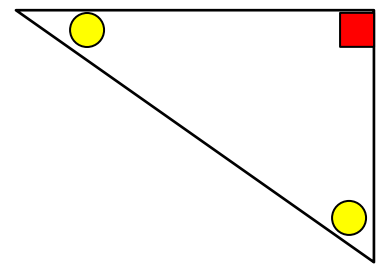
Name

Date



TRIANGLE CLASSIFICATION 1

ACUTE, OBTUSE OR RIGHT? ANSWERS

<p>1)</p>  <p>Type: Right</p>	<p>2)</p>  <p>Type: Acute</p>	<p>3)</p>  <p>Type: Obtuse</p>
<p>4)</p>  <p>Type: Acute</p>	<p>5)</p>  <p>Type: Obtuse</p>	<p>6)</p>  <p>Type: Right</p>

